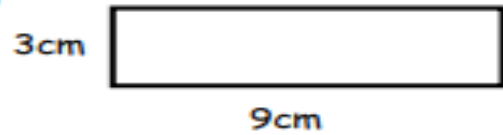


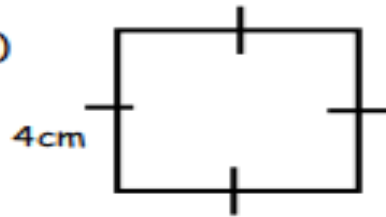
1) Trouver le périmètre.

a)



$$\begin{aligned} p &= a+b+c+d \\ &= 3+3+9+9 \\ &= 24 \text{ cm} \end{aligned}$$

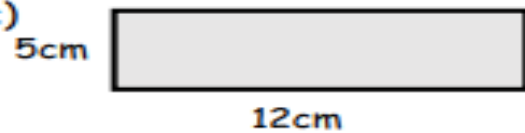
b)



$$\begin{aligned} p &= a+b+c+d \\ &= 4+4+4+4 \\ &= 16 \text{ cm} \end{aligned}$$

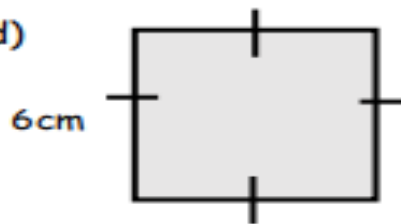
2) Trouver l'aire.

c)



$$\begin{aligned} a &= l \times l \\ &= 5 \times 12 \\ &= 60 \text{ cm}^2 \end{aligned}$$

d)



$$\begin{aligned} a &= l \times l \\ &= 6 \times 6 \\ &= 36 \text{ cm}^2 \end{aligned}$$