

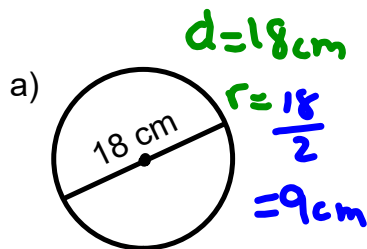


Warm Up Grade 7

Dec. 3, 2023



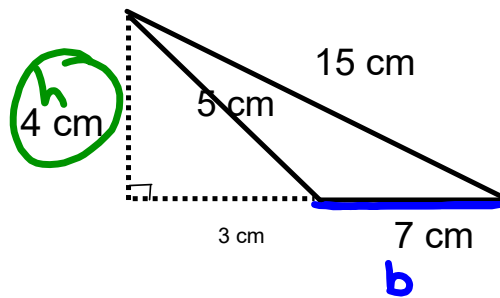
1) Find the area for each



$$A = \pi \times r \times r$$

$$= 3.14 \times 9 \text{ cm} \times 9 \text{ cm}$$

$$= 254.34 \text{ cm}^2$$

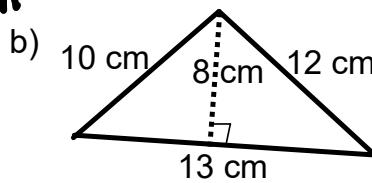


$$A_{\Delta} = \frac{b \times h}{2}$$

$$= \frac{7 \text{ cm} \times 4 \text{ cm}}{2}$$

$$= \frac{28 \text{ cm}^2}{2}$$

$$= 14 \text{ cm}^2$$



$$b = 13 \text{ cm}$$

$$h = 8 \text{ cm}$$

$$A_{\Delta} = ?$$

$$A_{\Delta} = \frac{b \times h}{2}$$

$$= \frac{13 \text{ cm} \times 8 \text{ cm}}{2}$$

$$= \frac{104 \text{ cm}^2}{2}$$

$$= 52 \text{ cm}^2$$

Homework Solutions

Homework Solutions Page 151 # 1(a,b), 2(b,d), 3(a,b,c), 4 or 5

pg 151

a) $r = 2 \text{ cm}$

$$\begin{aligned}
 A &= \pi \times r \times r \\
 &= 3.14 \times 2 \times 2 \\
 &= 12.56 \text{ cm}^2 \\
 &\approx 3 \times 2 \times 2 = 12
 \end{aligned}$$

c) $d = 14$
so $r = 7 \text{ cm}$

$$\begin{aligned}
 A &= \pi \times r \times r \\
 &= 3.14 \times 7 \times 7 \\
 &\approx 153.86 \text{ cm}^2
 \end{aligned}$$

b) $r = 7 \text{ cm}$

$$\begin{aligned}
 A &= \pi \times r \times r \\
 &= 3.14 \times 7 \times 7 \\
 &= 153.86 \text{ cm}^2 \\
 &\approx 3 \times 7 \times 7 \text{ or } 3 \times 50 = 150
 \end{aligned}$$

d) $d = 30 \text{ cm}$
so $r = 15 \text{ cm}$

$$\begin{aligned}
 A &= \pi \times r \times r \\
 &= 3.14 \times 15 \times 15 \\
 &= 706.5 \text{ cm}^2 \\
 &\approx 3 \times 225 \\
 &\quad 675
 \end{aligned}$$

$$2. a) r = 3 \text{ cm}$$

$$\begin{aligned} A &= \pi \times r \times r \\ &= 3.14 \times 3 \times 3 \\ &= 28.26 \text{ cm}^2 \\ &\approx 3 \times 3 \times 3 = 27 \end{aligned}$$

$$b) d = 12 \text{ cm}$$

$$\begin{aligned} r &= 6 \text{ cm} \\ A &= \pi \times r \times r \\ &= 3.14 \times 6 \times 6 \\ &= 113.04 \text{ cm}^2 \\ &\approx 3 \times 6 \times 6 = 108 \end{aligned}$$

$$c) r = 9 \text{ cm}$$

$$\begin{aligned} A &= \pi \times r \times r \\ &= 3.14 \times 9 \times 9 \\ &= 254.34 \text{ cm}^2 \\ &\approx 3 \times 9 \times 9 = 243 \end{aligned}$$

$$d) d = 24 \text{ cm}$$

$$\begin{aligned} r &= 12 \text{ cm} \\ A &= \pi \times r \times r \\ &= 3.14 \times 12 \times 12 \\ &= 452.16 \text{ cm}^2 \\ &\approx 3 \times 12 \times 12 \\ &\approx 3 \times 150 \\ &450 \end{aligned}$$

3a) Double the radius,
and the area becomes 4 times as
large
(quadruple)

$$r = 1 \quad A \approx 3.14 \times 1 \times 1 = 3.14$$

$$r = 2 \quad A \approx 3.14 \times 2 \times 2 = 12.56$$

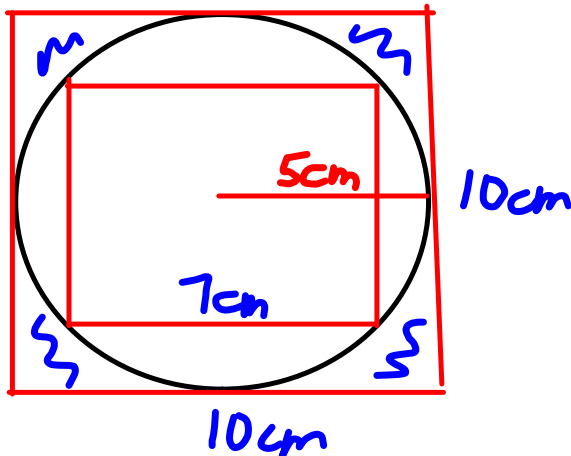
b) Look at 2a) and c)

Triple the radius, and the area
will be 9 times as large.

$$c) r = 4 \quad A \approx 3.14 \times 4 \times 4 = 50.24$$

Quadruple the radius and the area
will be sixteen times as large

pg 151
4.



$$\text{Area of small square} = 7 \times 7 \\ = 49 \text{ cm}^2$$

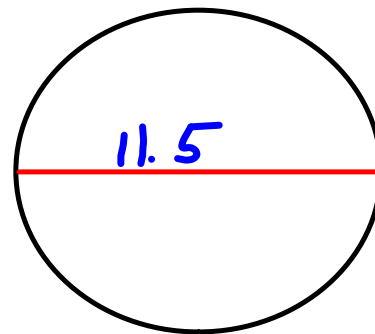
$$\text{Area of Large square} = 10 \times 10 \\ = 100 \text{ cm}^2$$

So ^{the} area of ^{the} circle is between 49 and 100
 $\approx 75 \text{ cm}^2$

$$\begin{aligned} \text{b) } A &= \pi \times r \times r \\ &= 3.14 \times 5 \times 5 \\ &= 78.5 \text{ cm}^2 \end{aligned}$$

• 5a) Diameter = 11.5 cm

$$r = \frac{11.5}{2}$$
$$= 5.75 \text{ cm}$$



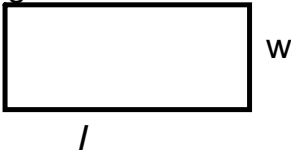
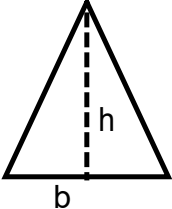
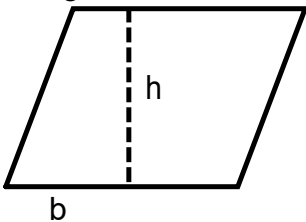
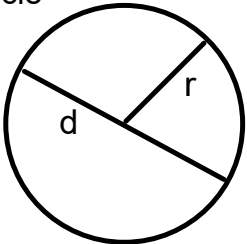
$$A = \pi \times r \times r$$
$$= 3.14 \times 5.75 \times 5.75$$
$$= 103.8 \text{ cm}^2 \quad \text{or } 104 \text{ cm}^2$$

• b) D = 4.5

$$r = \frac{4.5}{2}$$
$$= 2.25$$

$$A = \pi \times r \times r$$
$$= 3.14 \times 2.25 \times 2.25$$
$$= 15.89 \text{ cm}^2 \quad \text{or } 16 \text{ cm}^2$$

Grade 7 - Formula Sheet

	main formulas	rearranged formulas
<p>Rectangle</p> 	$\text{Area} = l \times w$	$w = \frac{\text{Area}}{l}$ $l = \frac{\text{Area}}{w}$
<p>Triangle</p> 	$\text{Area} = \frac{b \times h}{2}$	$b = \frac{2 \times \text{Area}}{h}$ $h = \frac{2 \times \text{Area}}{b}$
<p>Parallelogram</p> 	$\text{Area} = b \times h$	$b = \frac{\text{Area}}{h}$ $h = \frac{\text{Area}}{b}$
<p>Circle</p>  <p>$d = 2r$ $r = d \div 2$</p>	<p>Circumference = $\pi \times d$</p> <p>Circumference = $2\pi r$</p> <p>Area = $\pi \times r \times r$</p>	$d = \frac{\text{circumference}}{\pi}$

Class / Homework

Page 168-170

#2, #3, #4,#5, #9,#10,#11, #13,#14

Test Wednesday, Dec. 6

Review for Test

Know the terms throughout the unit, such as:

Circumference, radius (radii) , diameter, parallelogram, triangle, circle,pi,sector, congruent.....

Know the formulas:

Circumference

Perimeter

Area of : Circle, Triangle, Parallelogram, Rectangle

Know the relationships between:

Diameter and Radius

Area of a Triangle and Area of a Parallelogram(Rectangle)

Be able to draw a circle, using a compass, with a given diameter or radius