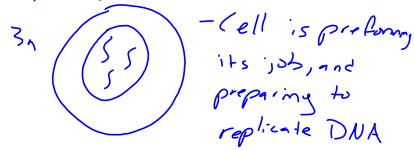
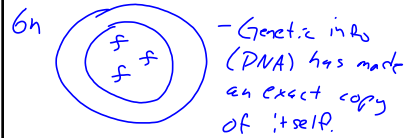


Using diagrams, describe the phases of mitosis for a  $3n$  cell starting in interphase. **PMAT**


Interphase



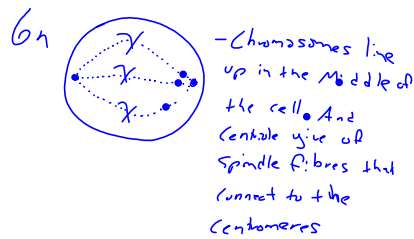
Late Interphase



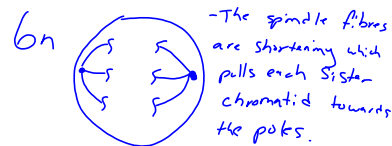
Prophase



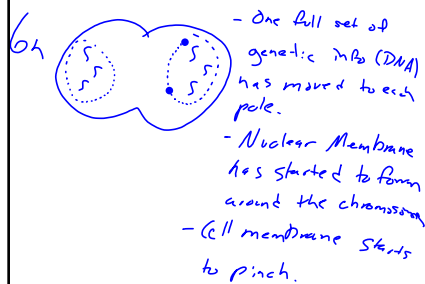
Metaphase



Anaphase



Telophase



Cytokinesis

