

Sept 6

Warm Up

1) Represent the scenario with an integer

a) Earned \$7 b) lost 67 pounds c) deposit 4 coins


+7 -67 +4

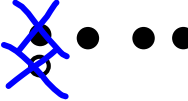
2) Order integers from smallest to largest or largest to smallest

~~-11, 0, -6, -14, +3~~
 -14, -11, 0, +3, +23 +23, +3, 0, -11, -14

3) Place <, >, or = into the blank a) +7 > -3 b) -4 > -5

4) What integer is modelled by the following:

a) 
 -10

b) 
 +3

Zero Pairs Video

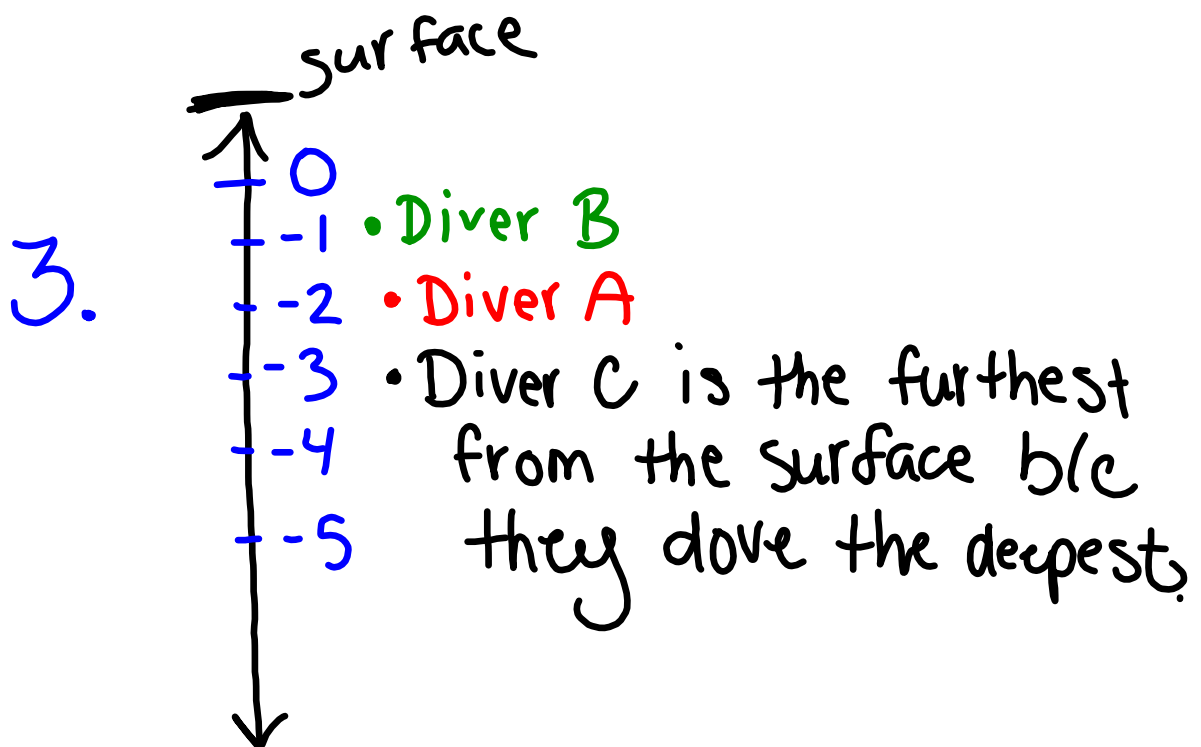


Let's finish yesterdays sheet!
When you are done...put your
pencil down and sit quietly

1. (a) $-72, -27, -15, -9, 0, +7,$
 $+11, +28, +52$

(b) $-3, 0, +2, +10, +11$

2. (a) +100 e) +7
(b) -218
(c) +37
(d) -3



$$\begin{array}{ll} 4. (a) +6 < +9 & d) -4 > -6 \\ (b) +1 > -3 & (e) -2 > -5 \\ (c) 0 < 7 & (f) -7 < 0 \end{array}$$

$$5. (a) -9, -8, -7, -6, -5, -4, -3, \\ -2, -1, 0, +1, +2, +3, +4$$

$$(b) \textcircled{-9} \\ -8, -7, -6, -5, -4, -3, -2, -1$$

$$(c) \textcircled{+4} \\ +3, +2, +1$$

(d) It appeared in (a)

6. (a) True

(b) False

(c) True

(d) False

- 132

+ 41

Attachments



Zero Pairs