

Warm Up Grade 8



Mental Math

1. $15 \times 7 \times 2 \times 3 =$

$$\begin{array}{r} 15 \times 2 \times 7 \times 3 \\ 30 \times 7 \times 3 \\ \hline 210 \times 3 \\ \hline 630 \end{array}$$

2. $90 - 31 =$

$$\begin{array}{r} 90 - 30 = 60 \\ - 1 \\ \hline 59 \end{array}$$

3. 45% of 60 =

$$\begin{array}{l} 10\% \text{ of } 60 = 6 \\ \times 4 \\ \hline 40\% \text{ of } 60 = 24 \\ \rightarrow 5\% \text{ of } 60 = 3 \end{array}$$

$$45\% \text{ of } 60 = 27$$

Assessment Review

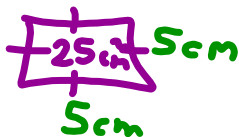
4) The area of one face of a cube is 25 cm^2 .

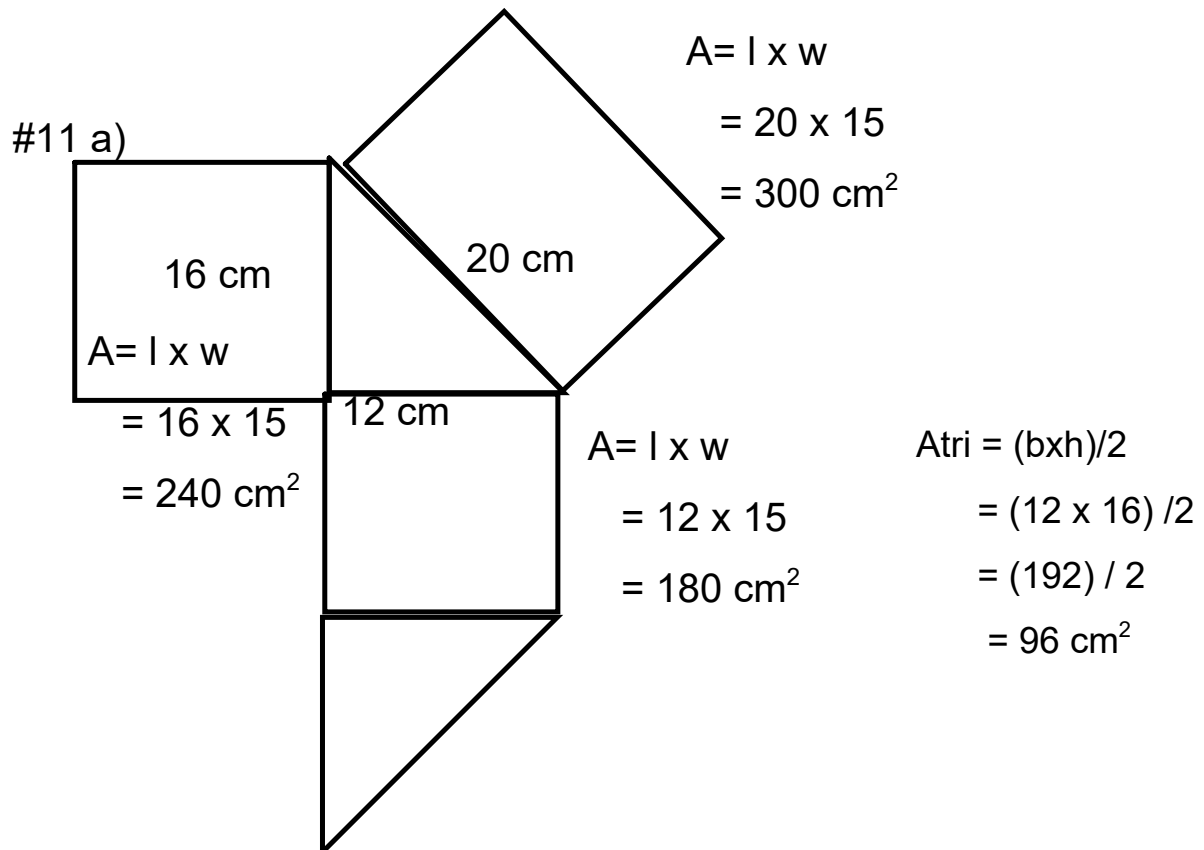
a) What is the surface area of the cube?

6 equal faces $25 \text{ cm}^2 \times 6 \text{ faces}$

b) What is the side length of the cube?

150 cm^2





$$\begin{aligned}
 \text{Total SA} &= 2 \text{ Tri} + \text{rec} + \text{rec} + \text{rec} \\
 &= 2(96) + 180 + 240 + 300 \\
 &= 192 + 180 + 240 + 300 \\
 &= 912 \text{ cm}^2
 \end{aligned}$$

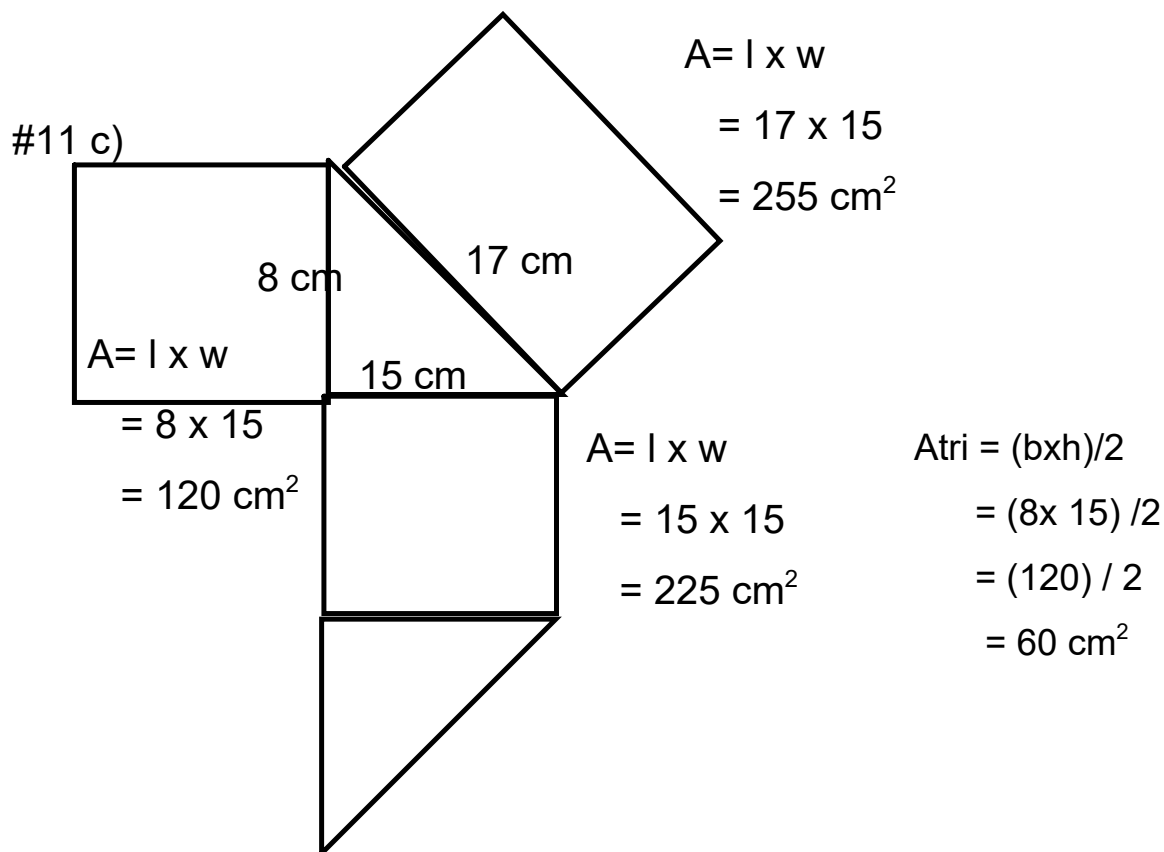
#11 b)

$A = l \times w$
 $= 18 \times 15$
 $= 270 \text{ cm}^2$

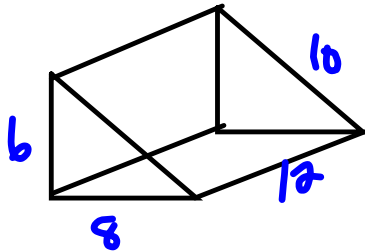
$A = l \times w$
 $= 15.6 \times 15$
 $= 234 \text{ cm}^2$

$A_{\text{tri}} = (bxh)/2$
 $= (15.6 \times 15.6) / 2$
 $= (243.36) / 2$
 $= 121.68 \text{ cm}^2$

$$\begin{aligned}
 \text{Total SA} &= 2 \text{ Tri} + \text{rec} + \text{rec} + \text{rec} \\
 &= 2(121.36) + 270 + 270 + 234 \\
 &= 243.36 + 270 + 270 + 234 \\
 &= 1017.36 \text{ cm}^2
 \end{aligned}$$

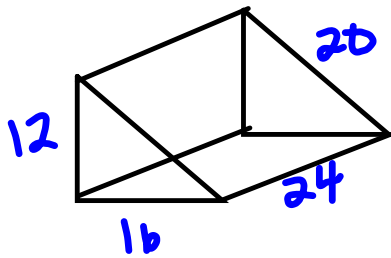


$$\begin{aligned}
 \text{Total SA} &= 2 \text{ Tri} + \text{rec} + \text{rec} + \text{rec} \\
 &= 2(60) + 120 + 255 + 225 \\
 &= 120 + 120 + 255 + 225 \\
 &= 720 \text{ cm}^2
 \end{aligned}$$

12. Using $9(6)$,

$$SA < 236.$$

Double each



$$\begin{aligned} A_b &= \frac{b \times h}{2} \\ &= \frac{12 \times 6}{2} \\ &= \frac{72}{2} \\ &= 36 \text{ cm}^2 \end{aligned}$$

$$\begin{aligned} &3 \text{ faces} \\ A &= 12 \times 24 \\ &= 288 \end{aligned}$$

$$\begin{aligned} A &= 16 \times 24 \\ &= 384 \end{aligned}$$

$$\begin{aligned} A &= 20 \times 24 \\ &= 480 \end{aligned}$$

$$\begin{aligned} SA &= 2 \times 36 + 288 + 384 + 480 \\ &= 72 + 288 + 384 + 480 \\ &= 1344 \end{aligned}$$

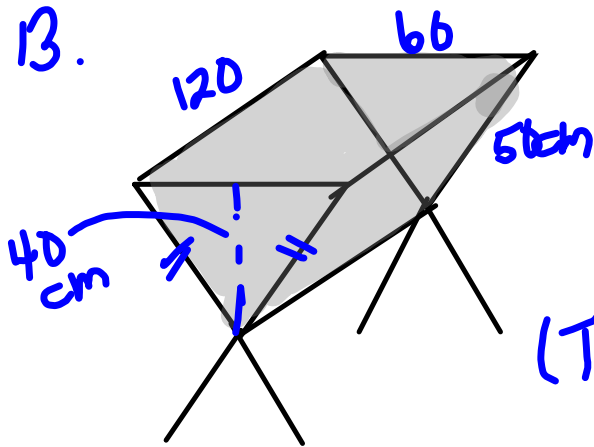
$236 \times 2 = 472$, which is much lower than 1344 cm^2

Really 4 times lower

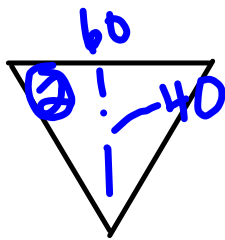
$$A = l \times w$$

$$= 2l \times 2w$$

$$= 4 \times l \times w$$



Water Trough
 → Faces
 2 triangles, 2 rectangle
 (There is no face on the top)

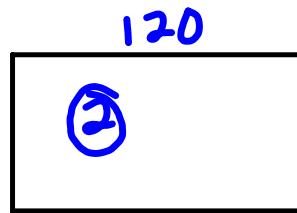


$$A = \frac{b \times h}{2}$$

$$= \frac{60 \times 40}{2}$$

$$= \frac{2400}{2}$$

$$= 1200$$



$$A = l \times w$$

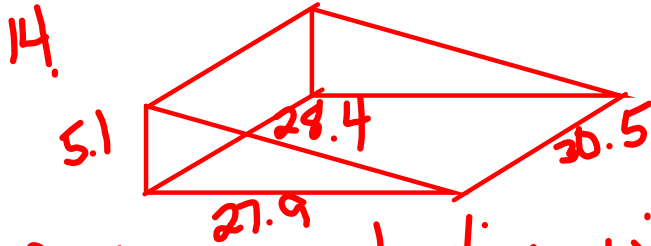
$$= 120 \times 50$$

$$= 6000$$

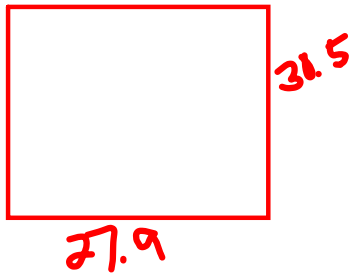
$$\text{Area of metal} = 2 \times 1200 + 2 \times 6000$$

$$= 2400 + 12000$$


$$= 14400 \text{ cm}$$



Binder, so plastic will only go on the rectangular faces.



$$\begin{aligned} A &= l \times w \\ &= 27.9 \times 30.5 \\ &= 850.95 \end{aligned}$$

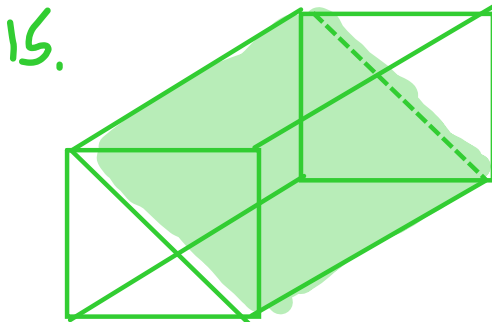


$$\begin{aligned} A &= l \times w \\ &= 28.4 \times 30.5 \\ &= 866.2 \end{aligned}$$




$$\begin{aligned} A &= l \times w \\ &= 30.5 \times 5.1 \\ &= 155.55 \end{aligned}$$

$$\begin{aligned} \text{Plastic} &= 850.95 + 866.2 + 155.55 \\ \text{Needed} &= 1872.7 \text{ cm}^2 \end{aligned}$$

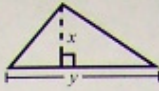


If you cut it in half the SA of the triangular prism will be more than half the SA of the rectangular prism because you have to include the slant face in the cut

Mathematics Assessment at Grade 8 Formula Sheet

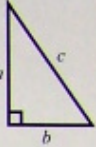


Area $A = xy$
Perimeter $P = 2x + 2y$

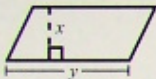


Area $A = \frac{1}{2}xy$ or $\frac{xy}{2}$


Pythagorean
Theorem



$c^2 = a^2 + b^2$

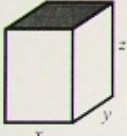


Area $A = xy$




Volume $V = x^3$
Surface Area $= 6x^2$

**For the provincial
assessment, it is acceptable
to round the value of
 π to 3.14.*

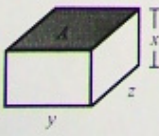


Volume $V = xyz$
Surface Area $= 2xy + 2xz + 2yz$

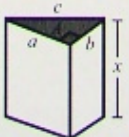


*Area $A = \pi r^2$
Circumference $C = \pi d$ or $C = 2\pi r$


$1 \text{ cm}^3 = 1 \text{ mL}$



Volume $V = Ax$

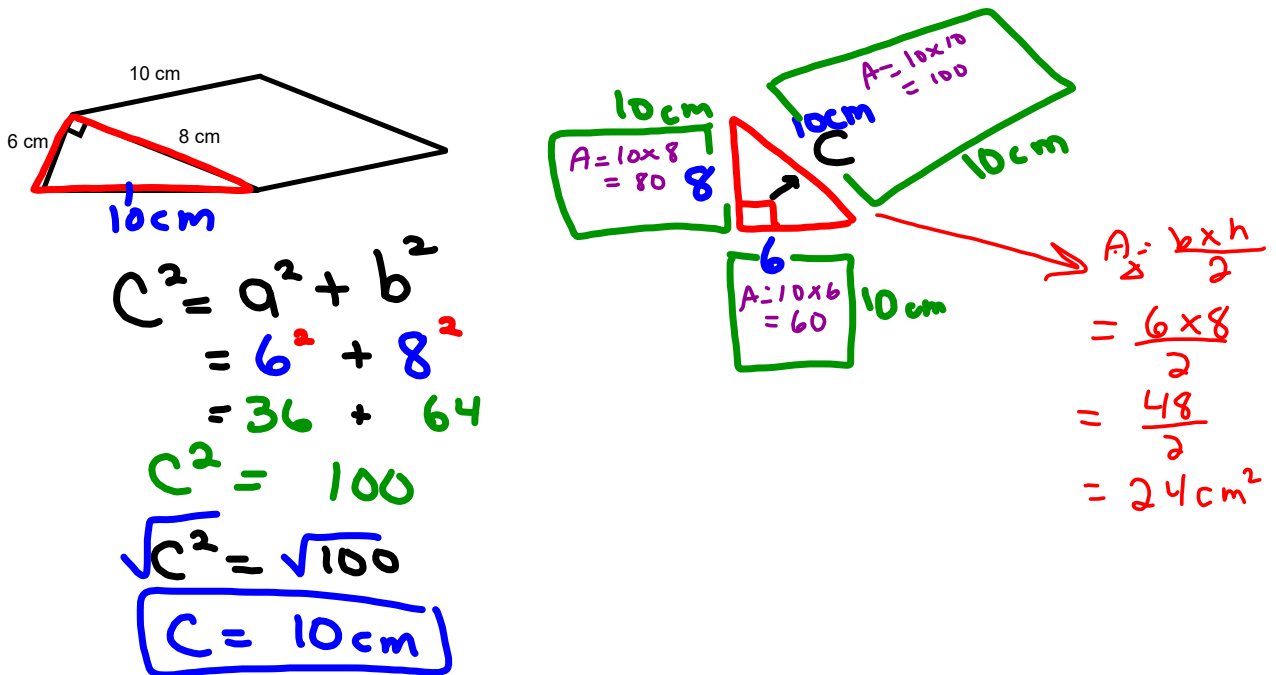


Volume $V = Ax$
Surface Area $= 2\left(\frac{1}{2}ab\right) + ax + bx + cx$



Volume $V = Ax$
Surface Area $= 2\pi r^2 + \pi dx$ or $2\pi r^2 + 2\pi rx$

Find the surface area of the wedge of cheese shown.



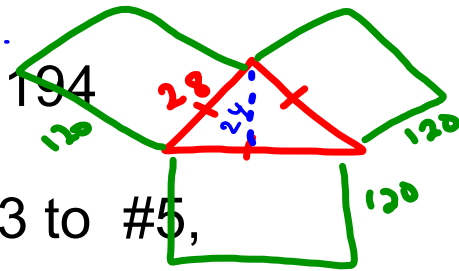
$$\begin{aligned}
 \text{Total SA} &= 2\Delta + \square + \square + \square \\
 &= 2(24) + 100 + 80 + 60 \\
 &= 48 + 100 + 80 + 60 \\
 &= 288 \text{ cm}^2
 \end{aligned}$$

Page 194 - #3 to #5

sheet #2 to 5

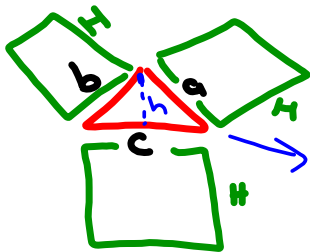
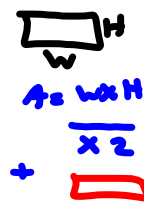

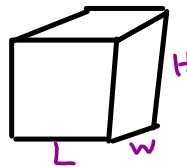
Class/Homework

Page 194



#3 to #5,

Sheet #2 to #5



$$A = \frac{b \times h}{2}$$

Quiz Tuesday (TOMORROW)

Attachments

Review of Surface area of 2D Shape Grade 8 Unit 4 PDF.pdf

Surface Area of Prisms WS Review PDF.pdf