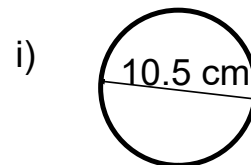
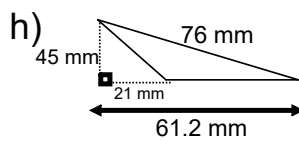
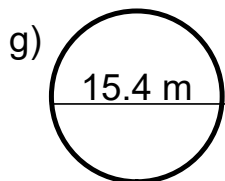
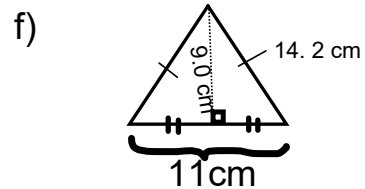
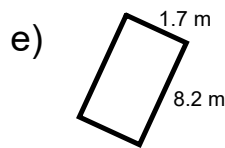
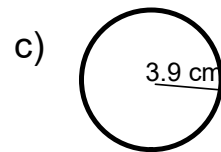
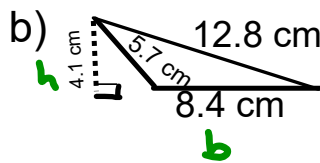
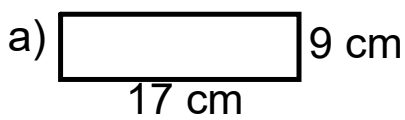
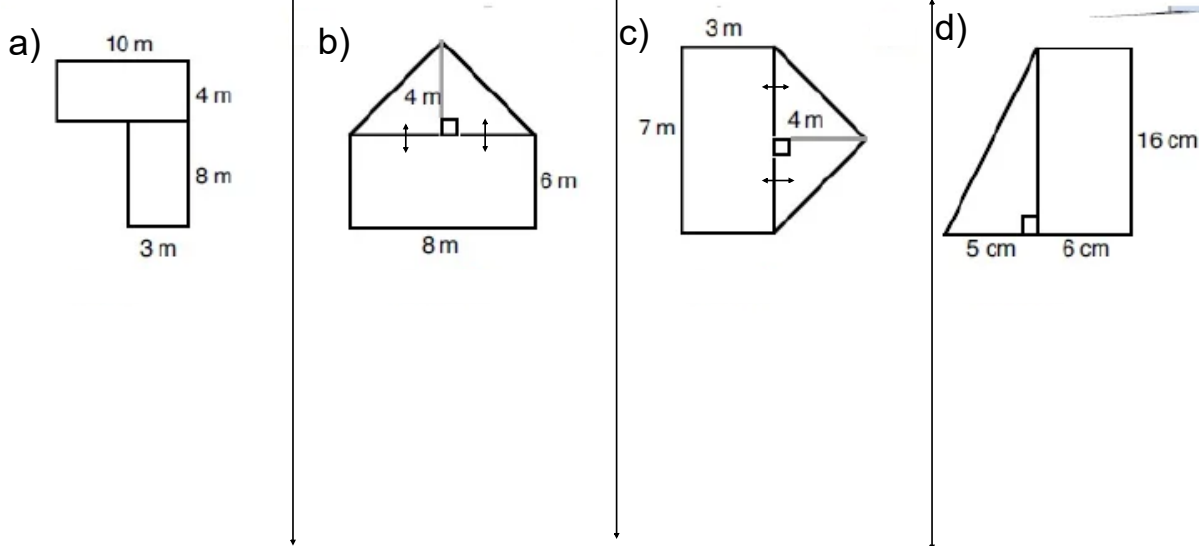


Name: _____

1) Find the area of each shape (Show all work)



2) Find the total surface area of the combined shapes (Show all work)



3) Find the surface area of each shape.

a) A triangle with a base of 7 cm and a height of 14 cm.

b) a circle with a diameter of 34 cm.

c) A Rectangle with a length of 16 cm and the height double that.

d) A square with side length 23 m.

e) A rectangle with base 42m and height length of 15 m less than base.

f) A circle with radius 6.2 mm.

Attachments

Review of Surface area of 2D Shape Grade 8 Unit 4 PDF.pdf