


Warm Up Grade 7



1) Write an equation for the following:

let $n \equiv$ a number

a) 7 more than triple a number is 28.

add 7

3 times "n"

$$3n + 7 = 28$$

b) Jake has 5 cookies. He has 6 less than Ryan How many cookies does Ryan have?

let $r \equiv$ # of cookies Ryan has

$$r - 6 = 5$$

2) Evaluate the expression:

a) $2x - 10$ for $x = 5$

b) $7 + n$ for $n = -2$

$$\begin{aligned} & 2(5) - 10 \\ & 10 - 10 \\ & 0 \end{aligned}$$

$$\begin{aligned} & = 7 + (-2) \\ & = (+5) \end{aligned}$$

1. Write a sentence for each equation.

a) $n + 11 = 15$

b) $4n = 24$

c) $n/6 = 5$

d) $3n + 4 = 19$

a) $n + 11 = 15$

The number of students increased by 11 is 15

b) $4n = 24$

4 times the hourly wage is 24

c) $\frac{n}{6} = 5$

A number divided by 6 equals 5

d) $3n + 4 = 19$

4 more than triple the number of points is 5

2.

a) Two more than five times a number is 17.

 $n = \text{the number}$

$$2 + 5n = 17$$

$$5n + 2 = 17$$

b) Shawn's age 9 years from now will be 23.

 $s = \text{Shawn's age}$

$$s + 9 = 23$$

c) The perimeter of a regular hexagon with side length s centimetres is 42 cm.hexagon \rightarrow 6 sides

$$6s = 42$$

d) The cost of three boxes of popcorn at \$3 each, and two drinks at x dollars each is \$17.

$$3 \times 3 + 2x = 17$$

$$9 + 2x = 17$$

$$9 + 2 \text{ drink} = 17$$

$$\text{popcorn} + 2x$$

$$2x + 9 = 17$$

3. Match each equation with the correct sentence.

a) $n + 3 = 6$

A. A number divided by three equals six.

b) $3n = 6$

B. The sum of a number and three is six.

c) $n/3 = 6$

C. The product of a number and three is six.

d) $3n + 3 = 6$

D. Three more than three times a number is six.

a) B

b) C

c) $\frac{n}{3} = 6$ A

d) D

4.
a) Samantha has 16 CDs. She has 4 more CDs than Marlene.
How many CDs does Marlene have?

$$n = \text{Marlene's CDs} \quad n + 4 = 16$$

- b) If Juni doubles the number of comic books he has, he will have 14 comic books. How many comic books does Juni have?

$$n = \text{number of comic books} \quad 2n = 14$$

- c) Five more than three times a number is 17.
What is the number?

$$n = \text{the number} \quad 5 + 3n = 17$$

$$3n + 5 = 17$$

- d) In the game of Yonder, a player scores x points for a Pika and 3 points for a Grinner.
Samuel scored 20 points. He had 4 Grinners and 2 Pikas.
How many points is one Pika worth?

x = Pika points

$$4 \times 3 + 2x = 20$$

$$12 + 2x = 20$$



$$5. \quad 2n + 3 = 15$$

Two times the goals scored plus 3 is 15.

6. Angelica is thinking of a number. She multiplies it by 5 and then adds 7.
The result is 22. Write an equation to represent this situation.

$$n = \text{the number} \quad 5n + 7 = 22$$



Warm Up Grade 7



Write an equations and solve the following by inspection

a) The sum of a number and 15 is 21

add $n + 15 = 21$

b) $2x - 6 = 32$

$38 - 6$
 $2(19)$

Use mental math.

1. $500 - 297$

$500 - 300$
 200
 $= 203$

$2 \frac{1}{3} + \frac{4}{6}$
 $\frac{2}{6} + \frac{4}{6}$
 $\frac{6}{6} = 1$

subtract 3 too many so add on

3. $25 \times 17 \times 4$

$25 \times 4 \times 17$
 100×17
 1700

4. 0.2×43

0.2×43
 8.6

Homework

pg 225

8. The side of regular octagon is 11cm. What is the perimeter

$p =$ perimeter of octagon

$$p = 11 \times 8$$

$$= 88$$

9. $k =$ number of friend to get keychain

$$24k + 10 = 130$$

guess and test

$$k=4 \quad \begin{array}{r} 24k+10 \\ 24 \times 4 + 10 \\ 96 + 10 \\ 106 \end{array}$$

$$k=5 \quad \begin{array}{r} 24k+10 \\ 24 \times 5 + 10 \\ 120 + 10 \\ 130 \end{array}$$

$$k=5$$

5 friends each got keychains

10a) $3h = 27$

$$h = 9 \quad (\text{Insp})$$

b) $2h + 3 = 27$

$$h = 12 \quad (\text{Insp})$$

c) $2h - 3 = 27$

$$2 \times 15 - 3 = 27$$

$$h = 15 \quad (\text{Insp})$$

d) $\frac{n}{3} = 27$

$$n=99 \quad \begin{array}{r} \frac{n}{3} \\ 99 \\ \underline{3} \\ 33 \end{array}$$

$$n=90 \quad \begin{array}{r} \frac{n}{3} \\ 90 \\ \underline{3} \\ 30 \end{array}$$

$$n=81 \quad \begin{array}{r} \frac{n}{3} \\ 81 \\ \underline{3} \\ 27 \end{array}$$

$$n=81$$

Sheet Extra Practice 1

1 a) $5x = 65$

Equation

b) $y + 8$

Expression

c) $3a - 6$

Ex

d) $2 + 3 = 9$

Eq

e) $\frac{p-4}{2}$

Ex

f) $3q - 5 = 19$

Eq

If it has an equal sign, then it is an equation.

$$2a) d + 9 = 23$$

$$\textcircled{1} d = 15$$

$$\begin{array}{r} d+9 \\ 15+9 \\ \hline 24 \end{array}$$

$$\textcircled{2} d = 14$$

$$\begin{array}{r} d+9 \\ 14+9 \\ \hline 23 \end{array}$$

$$\textcircled{d=14}$$

$$b) \frac{p}{4} = 6$$

$$\textcircled{d=24}$$

$$\begin{array}{r} \frac{p}{4} \\ \frac{24}{4} = 6 \end{array}$$

$$c) 3c - 5 = 16$$

$$c = 6$$

$$\begin{array}{r} 3c - 5 \\ 3 \times 6 - 5 \\ 18 - 5 \\ \hline 13 \end{array}$$

$$c = 7, 3c - 5$$

$$\begin{array}{r} 3 \times 7 - 5 \\ 21 - 5 \\ \hline 16 \end{array}$$

$$\boxed{c=7}$$

$$d) 2x + 3 = 17$$

$$x = 8$$

$$\begin{array}{r} 2x + 3 \\ 2 \times 8 + 3 \\ 16 + 3 \\ \hline 19 \end{array}$$

$$x = 7, 2x + 3$$

$$\begin{array}{r} 2 \times 7 + 3 \\ 14 + 3 \\ \hline 17 \end{array}$$

$$\textcircled{x=7}$$

$$e) 4y = 52$$

$$y = 12$$

$$\begin{array}{r} 4y \\ 4 \times 12 \\ \hline 48 \end{array}$$

$$y = 13, 4y$$

$$\begin{array}{r} 4 \times 13 \\ \hline 52 \end{array}$$

$$\textcircled{y=13}$$

$$f) 2e + 7 = 31$$

$$e = 14$$

$$\begin{array}{r} 2e + 7 \\ 2 \times 14 + 7 \\ 28 + 7 \\ \hline 35 \end{array}$$

$$e = 12$$

$$\begin{array}{r} 2e + 7 \\ 2 \times 12 + 7 \\ 24 + 7 \\ \hline 31 \end{array}$$

$$\textcircled{e=12}$$

$$3a) 5a = 35$$

$$a = 7$$

$$b) x + 7 = 13$$

$$x = 6$$

$$c) p - 8 = 15$$

$$p = 23$$

$$d) 2z - 3 = 13$$

$$z = 8$$

$$e) 3d + 7 = 19$$

$$d = 4$$

$$f) 4c - 1 = 19$$

$$c = 5$$

4. a) $n =$ hockey cards at beginning

$$n - 15 = 37$$

$$n = 50, n - 15$$

$$50 - 15$$

$$35$$

$$n = 52, n - 15$$

$$52 - 15$$

$$37$$

$$n = 52$$

He started with 52 cards

b) $d =$ cost of each DVD

$$15d = 255$$

$$d = 10, 15d$$

$$15 \times 10$$

$$150$$

$$d = 15, 15d$$

$$15 \times 15$$

$$225$$

$$d = 17, 15d$$

$$15 \times 17$$

$$255$$

She paid \$17 for each DVD

c) $d =$ number of friends

$$5d = 35$$

$$d = 7$$

7 friends were given cardies

5. $n =$ the number

$$\begin{aligned} \text{a) } n + 6 &= 17 \\ n &= 11 \end{aligned}$$

$$\begin{aligned} \text{b) } n - 5 &= 23 \\ n &= 28 \end{aligned}$$

$$\begin{aligned} \text{c) } 3n &= 18 \\ n &= 6 \end{aligned}$$

$$\begin{aligned} \text{d) } \frac{n}{4} &= 8 \\ n &= 32 \end{aligned}$$

$$\begin{aligned} \text{e) } 3n + 2 &= 17 \\ n &= 5 \end{aligned}$$

$$\begin{aligned} \text{f) } 2n - 5 &= 9 \\ n &= 7 \end{aligned}$$

6. $p =$ number of puzzles for each friend

$$8p + 9 = 57$$

$$\begin{aligned} p = 5 & \quad 8p + 9 \\ & \quad 8 \times 5 + 9 \\ & \quad 40 + 9 \\ & \quad 49 \end{aligned}$$

$$\begin{aligned} p = 6, & \quad 8p + 9 \\ & \quad 8 \times 6 + 9 \\ & \quad 48 + 9 \\ & \quad 57 \end{aligned}$$

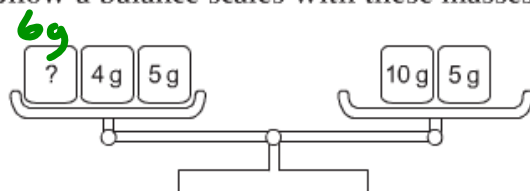
$p = 6$

Each friend gets 6 puzzles

BEFORE**Get Started**

Review the balance scales at the top of page 226 of the Student Book.

Show a balance scales with these masses:



Ask:

- What happens if I remove the 5-g mass from the left pan? (*The balance tips to the right.*) Why? (*Because the mass in the right pan is greater than the mass in the left pan.*)
- What happens if, instead, I remove a 5-g mass from each pan? (*The balance does not move.*) Why? (*Because you removed the same mass from each pan to keep the balance.*)
- What does this mean? (*The masses in the two pans are equal. The unknown mass plus the 4-g mass are balanced by the 10-g mass.*)

Balance Model

MUST keep the scales BALANCED (which means equal)

Write an equation for each scale then solve

a)
$$\frac{7 \times 2}{\quad} = \frac{8 + 2 + x}{\quad}$$

$$10 + x = 14$$

$$\cancel{10} + x = 14 - \cancel{10}$$

$$x = 4$$

in the scale what do I have to do to get the variable all by itself

b)
$$\frac{4 + 3 - 9}{\quad} = \frac{6 - 4 - k}{\quad}$$

$$-2 + k = 2 - k$$

$$k - 2 = 2$$

$$\boxed{k = 4}$$

c)
$$\frac{18 \div 3}{\quad} = \frac{m + m + m}{\quad}$$

$$3m = 6$$

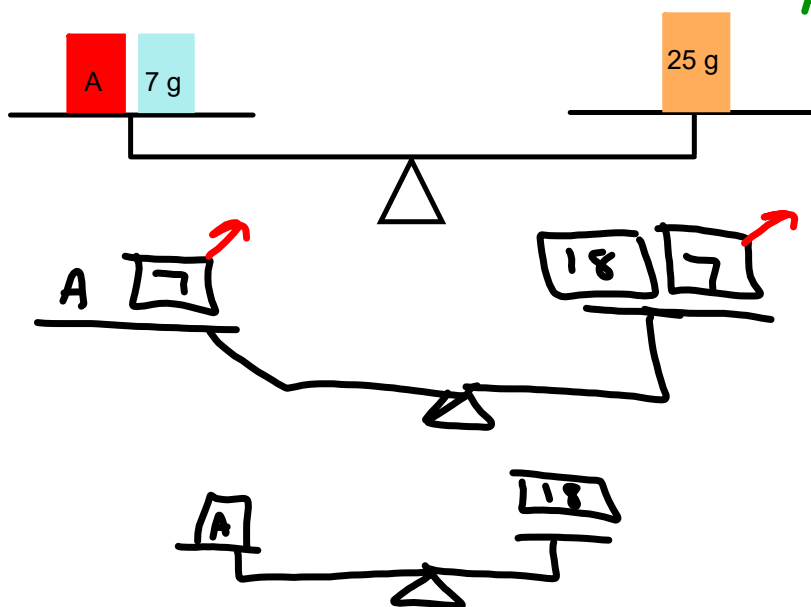
$$\boxed{m = 2}$$

Here is a balance-scales model.
Mass A is an unknown mass.
Find the mass of A. Verify the solution.

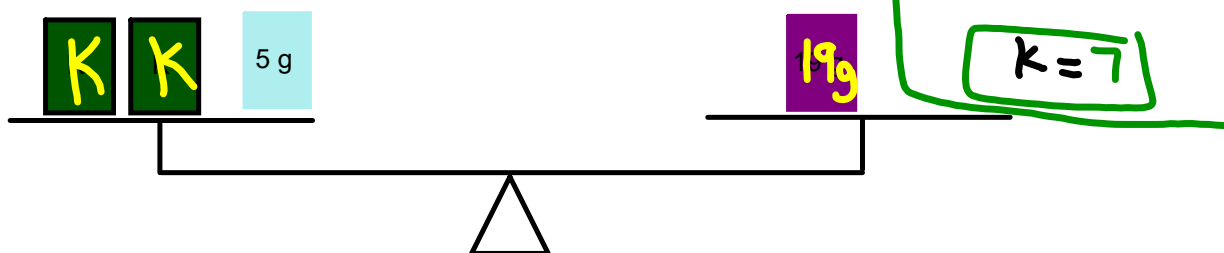
$$A + 7 = 25$$

$$A + \cancel{7} = 25 - \cancel{7}$$

$$A = 18$$



Here is a balance-scales model.
Mass K is an unknown mass.
Find the mass of K. Verify the solution.



Solving equations requires that the **balance of the equation** is maintained so that the **expressions** on either side of the equal sign continue to represent the same quantity.

To KEEP balance and equality:

- We can add the same quantity (mass) to each side.
- We can subtract the same quantity (mass) to each side.
use arrow pointing away for balances
- We can divide each side into the same number of equal groups.

Sketch balance scales to represent the equation.
Solve the equation. Verify the solution.

$3n + 1 = 7$
 ~~$3n + 1 = 7 - 1$~~
 $\frac{3n}{3} = \frac{6}{3}$
 $n = 2$

$n n n \square 1$
 $n n n \square 1$
 $n n n$
 $n n n$

$\square 7$
 \triangle
 \triangle
 \triangle
 \triangle
 \triangle
 \triangle
 $\square 6 \square 1$
 6
 $2 \ 2 \ 2$

Draw a balance and solve:

Your Turn


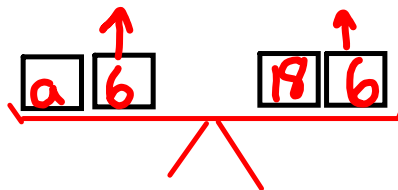
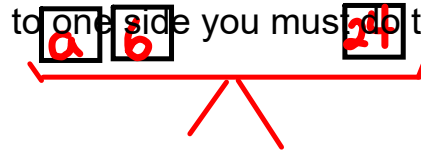
show work using algebra

$$a + 6 = 24$$

$$a + \cancel{6} - 6 = 24 - 6$$

$$a = 18$$

Do we really need to how work using balance? No Just remember what you do to one side you must do to the other.

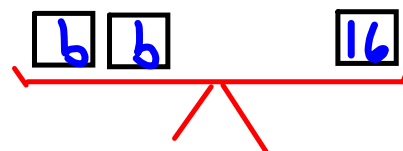


Ex 2)

$$2b = 16$$

$$\div 2 \quad \div 2$$

$$b = 8$$



Class/Homework

Sheet Extra Practice 2

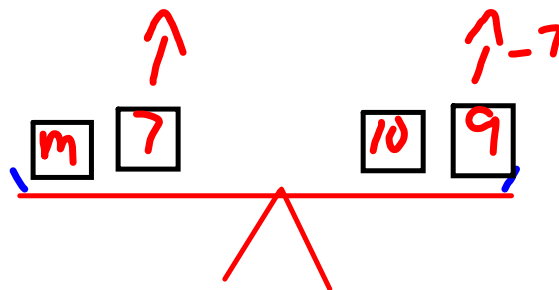
#1 -Sketch and solve part i to iv

Solve part v to viii

#2 , #3, #4, #5

Solve by either drawing or showing algebraic steps

use
Algebra



Attachments

Extra Practice 2 Solving Equations by balancing pdf.pdf