


Thursday



Directions: Collect the longest lines. Player A measures a line and writes the length next to the line. Player B measures a different line. When all the lines have been measured, add up the lengths of your lines. The person with the longest total length wins!



# Line up!



# Puzzle #1


#1  +  +  = 12

#2  +  = 16

#3  -  = 2

 =

 =




 =

© To the Square Inch, 2020 [www.tothesquareinch.com](http://www.tothesquareinch.com)

# Puzzle #2


#1  +  +  = 44

#2  +  = 40

#3  +  +  = 39

 =




 =



 =



© To the Square Inch, 2020 [www.tothesquareinch.com](http://www.tothesquareinch.com)




# Puzzle #3

#1  +  +  = 46

#2  +  = 38

#3  -  = 6





 =




 =



 =


© To the Square Inch, 2020 [www.tothesquareinch.com](http://www.tothesquareinch.com)


# Puzzle #4

#1  +  +  = 

#2  ×  = 

#3  +  = 48

 =

 =

 =

© To the Square Inch, 2020 [www.tothesquareinch.com](http://www.tothesquareinch.com)