

**MEASUREMENT:
MM, CM, M, KM**

NAME: _____

DATE: _____

A _____ - you can understand -
is about as long as a grain of sand.
When you buy food at lunch time,
it's about the thickness of a _____.

A staple - from side to side -
is about one _____ wide.
A fingernail on a girl or guy is about a centimeter high.

Ten millimeters is a _____.
One hundred centimeters is a _____.
One thousand meters - that's a _____,
and it's the same for _____ and _____.

A school bus wheel's diameter is about one _____,
and a meter is about as far as the length of a _____.

Run ten soccer fields in a row...
about a _____ you'll go.
It's about how far you'd walk
if you crossed _____ city blocks.

Imagine holding a grain of sand (about a _____!),
or a marble in your hand (about a _____!),
a door handle from the floor (about a _____!),
a ten-minute walk on the shore (about a _____!).



MEASUREMENT: MM, CM, M, KM

DRILLS

NAME: _____

DATE: _____

SYMBOLS

- millimeter (mm)
- centimeter (cm)
- meter (m)
- kilometer (km)


Circle the best estimate for the measurement that is the most appropriate for each item:

1) A frog's length.



4 cm 4 m

2) The length of a space shuttle.



59 km 59 m

3) The length of a raincoat.



1 m 1 cm

4) A parrot's height.




30 m 30 cm

5) A bear's height while standing.




140 cm 140 km

6) A mouse's length.




7 cm 7 m

7) A bison's length.




3 cm 3 m

8) An armadillo's length.



1 m 1 km

9) The length of a plane.




30 m 30 mm

10) The length of a guitar.



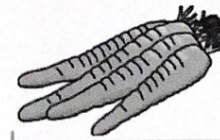
1 cm 1 m

11) The length of a boat.



10 m 10 km

12) The length of a carrot.



26 cm 26 mm