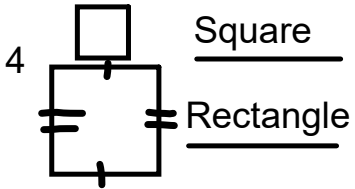


triangle




Square

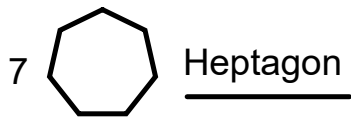
Rectangle



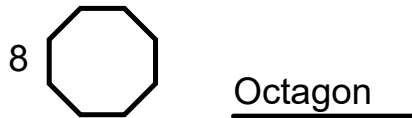
Pentagon



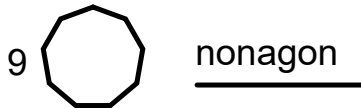
Hexagon



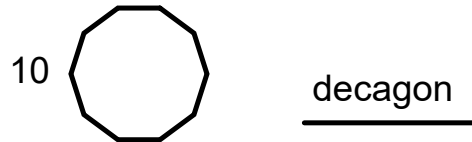
Heptagon



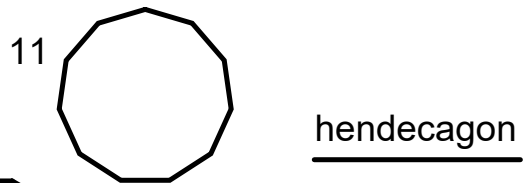
Octagon



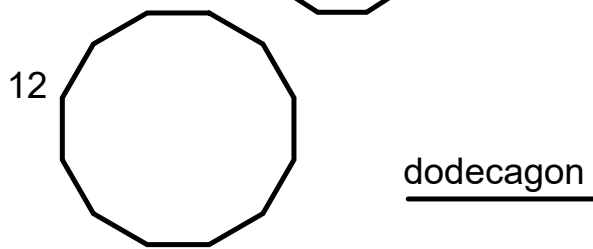
nonagon



decagon



hendecagon



dodecagon

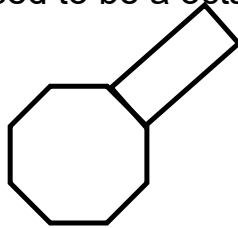
Ex) If The following is supposed to be a hexagonal pyramid then what/how many of each face are missing?

6 

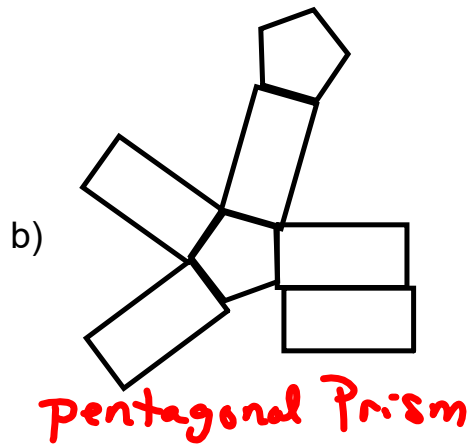
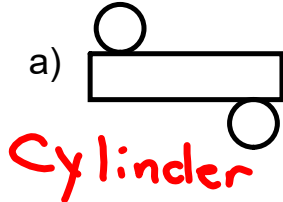


Ex) If The following is supposed to be a octagonal prism then what/how many of each face are missing?

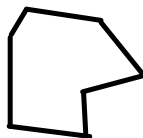
7 Rectangles
1 octagon



Ex) The following is a net of what?



Ex) Name the irregular shape based on the number of sides



Irregular heptagon

