

Name: \_\_\_\_\_

Add:


1.  $15 + 32 + 23 =$  \_\_\_\_\_

2.  $59 + 38 =$  \_\_\_\_\_

Subtract:

3.  $90 - 30 =$  \_\_\_\_\_

4.  $58 - 39 =$  \_\_\_\_\_



5. Josh has 54 pencils.

Ken has 63 pencils.

Who has an even number of pencils?



6. Write this number in expanded form.

**617**

7. Divide the rectangle into 8 squares.

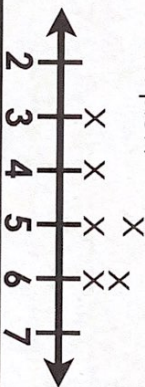


8. There are ninety bikers that leave the school each day. Forty-three go right and the rest go left. How many bikers turn left?

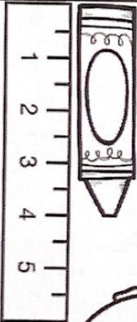
9. Jim measured pencils and made this table.

Pencil	Length (inches)
1	5 inches
2	3 inches
3	5 inches
4	4 inches
5	4 inches
6	6 inches
7	6 inches

Which number does he need to put an X over to complete the line plot?



10. This is an inch ruler. How long is the crayon?



Date: \_\_\_\_\_ # \_\_\_\_\_



#	answer
1	
2	
3	
4	
5	
6	
7	
8	
9	
10	