

Name: _____

Date: _____ # _____

Add:


1. $16 + 33 =$ _____

2. $46 + 46 =$ _____

Subtract:

3. $85 - 63 =$ _____

4. $57 - 48 =$ _____




5. Find the difference between 54 and 62?



6. Count by 10s. Which number comes next?
40, 50, 60, 70, _____

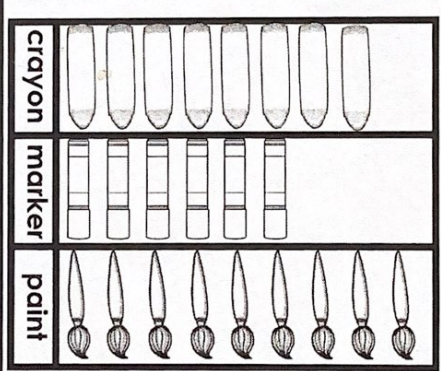
7. How many quadrilaterals?




8. There were 68 erasers in the box. Twelve were used. How many erasers are left?

9. How many kids participated in the survey?

Favorite Art Supply



10. Which is the best estimate for the length of a school bus?
A) 3 feet
B) 37 feet
C) 370 feet



#	answer
1	
2	
3	
4	
5	
6	
7	
8	
9	
10	



French Worksheet
Days of the week

Name _____

1. Monday

2. Tuesday

3. Wednesday

4. Thursday

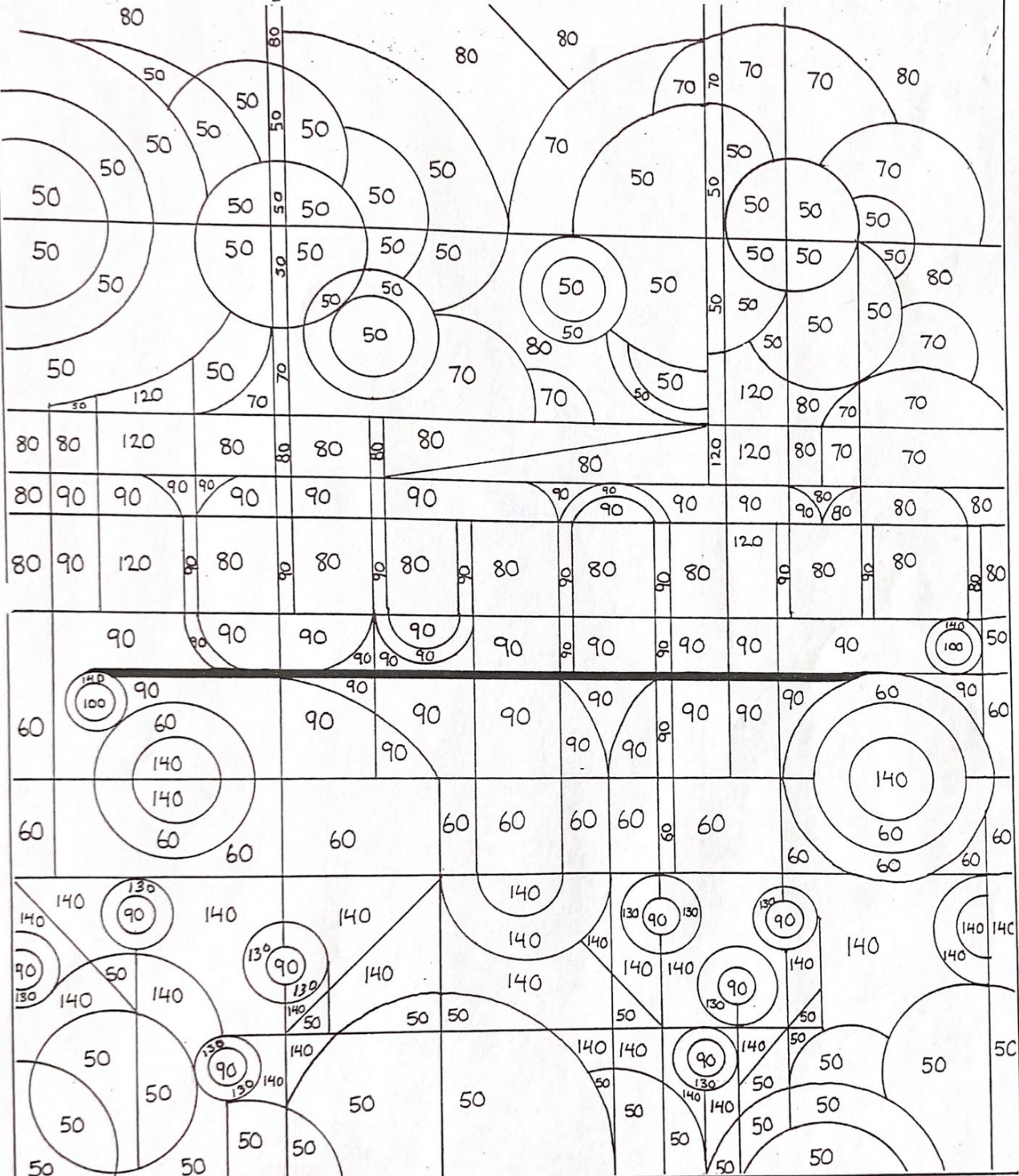
5. Friday

6. Saturday

7. Sunday

www.worksheetsworksheets.com

Qu'est-ce que c'est?



Code:

- | | | |
|---------|---------|--------|
| = gris | = vert | = rose |
| = noir | = blanc | = bleu |
| = jaune | = rouge | = brun |

C'est _____.