

French Wellies Colouring Sheet

Name: _____

Can you colour these wellies?



jaune



rouge



vert



noir



bleu



violet



rose



marron



orange

Name: _____

Add:


1. $33 + 54 =$ _____

2. $65 + 19 =$ _____

Subtract:

3. $82 - 71 =$ _____

4. $57 - 29 =$ _____



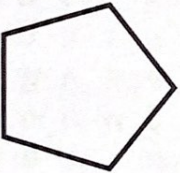
5. Fill in the missing number.

$33 + \underline{\hspace{2cm}} = 100$

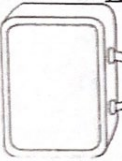
6. Compare the two numbers by writing $>$, $<$, or $=$ in the circle.

458 ○ **485**

7. Name this shape.

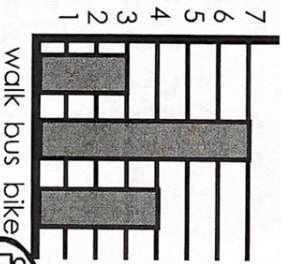


8. The school has two 3rd grade classes. Each class has 22 students. There are 50 seats in the cafeteria. How many extra seats are there when they go to lunch?



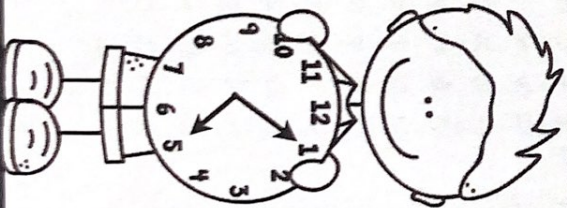
9. How many more students ride the bus than bike to school?

How Students Get to School



walk bus bike

10. What time is it?



Date: _____



#	answer
1	
2	
3	
4	
5	
6	
7	
8	
9	
10	



French Worksheet

Name _____

Parts of the Body

1. The head

2. The face

3. The hair

4. The eyes

5. The nose

6. The ears

7. The mouth

www.worksheetsworksheets.com