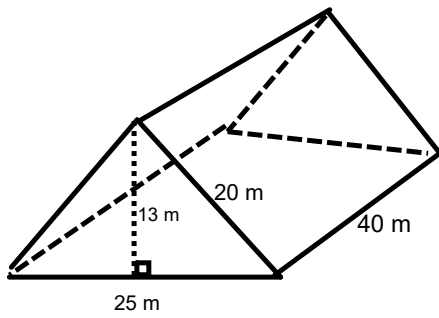





Warm Up Grade 8
Lesson 5
E-learning



Find the volume



solution

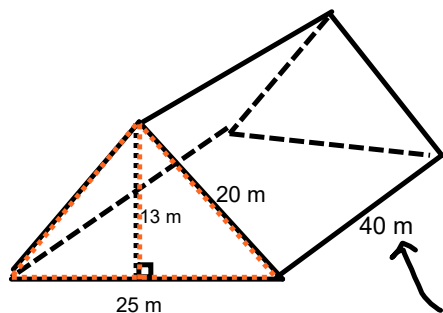


Find the volume

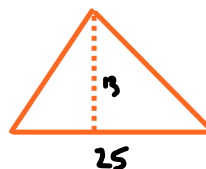
Warm Up Grade 8

Lesson 5

E-learning



Not on Δ
So H prism



$$\begin{aligned} A_{\Delta} &= \frac{b \times h}{2} \\ &= \frac{25 \text{ m} \times 13 \text{ m}}{2} \\ &= \frac{325 \text{ m}^2}{2} \end{aligned}$$

$$A_{\Delta} = 162.5 \text{ m}^2$$

$$\begin{aligned} V_{\Delta \text{ prism}} &= A_{\Delta} \times H \\ &= 162.5 \text{ m}^2 \times 40 \text{ m} \\ &= 6500 \text{ m}^3 \end{aligned}$$

Homework
Solutions

4a) $A_{\text{base}} = 9.2 \text{ cm}^2$

$h = 2.3 \text{ cm}$

$$\begin{aligned} \text{Vol} &= A_{\text{base}} \times h \\ &= 9.2 \times 2.3 \\ &= 21.16 \text{ cm}^3 \end{aligned}$$

$$\begin{array}{r} 9.2 \\ \times 2.3 \\ \hline 276 \\ 1840 \\ \hline 21.16 \end{array}$$

b) $A_{\text{base}} = 43.5 \text{ cm}^2$

$h = 5 \text{ cm}$

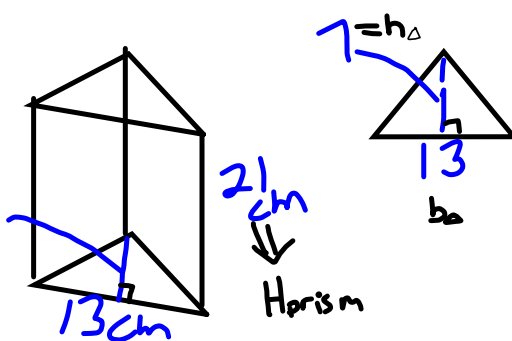
$$\begin{aligned} \text{Vol} &= A_{\text{base}} \times h \\ &= 43.5 \times 5 \\ &= 217.5 \text{ cm}^3 \end{aligned}$$

c) $A_{\text{base}} = 3 \text{ m}^2$

$h = 15 \text{ m}$

$$\begin{aligned} \text{Vol} &= A_{\text{base}} \times h \\ &= 3 \times 15 \\ &= 45 \text{ m}^3 \end{aligned}$$

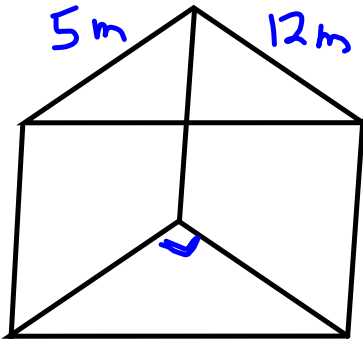
5.
★ a)



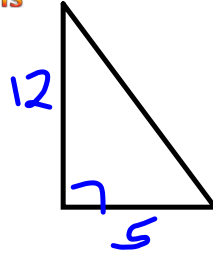
$$\begin{aligned} A_{\text{base}} &= \frac{b \times h_{\Delta}}{2} \\ &= \frac{13 \times 7}{2} \\ &= \frac{91}{2} \\ &= 45.5 \text{ cm}^2 \end{aligned}$$

$$\begin{aligned} \text{Vol} &= A_{\text{base}} \times H_{\text{prism}} \\ &= 45.5 \times 21 \\ &= 955.5 \text{ cm}^3 \end{aligned}$$

★ b)



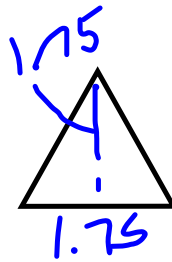
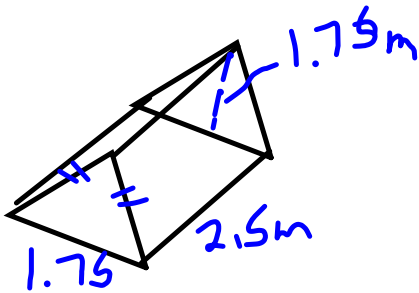
Homework
Solutions



$$\begin{aligned}
 A_{\text{base}} &= \frac{b \times h}{2} \\
 &= \frac{12 \times 5}{2} \\
 &= \frac{60}{2} \\
 &= 30 \text{ m}^2
 \end{aligned}$$

$$\begin{aligned}
 \text{Vol} &= A_{\text{base}} \times h \\
 &= 30 \times 8 \\
 &= 240 \text{ m}^3
 \end{aligned}$$

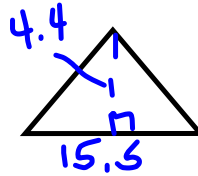
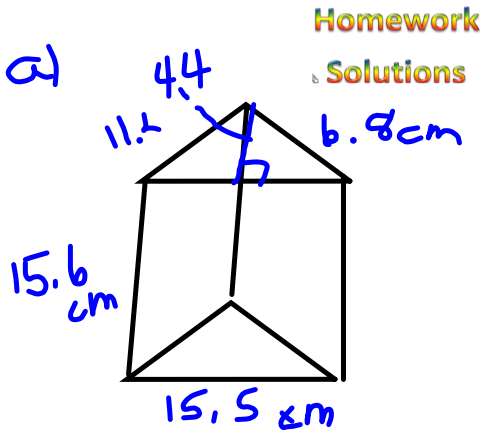
★ c)



$$\begin{aligned}
 A_b &= \frac{b \times h}{2} \\
 &= \frac{1.75 \times 1.75}{2} \\
 &= \frac{3.0625}{2} \\
 &= 1.53125 \text{ m}^2
 \end{aligned}$$

$$\begin{aligned}
 \text{Vol} &= A_{\text{base}} \times h \\
 &= 1.53125 \times 2.5 \\
 &= 3.828125 \text{ m}^3 \\
 &\text{or } 3.8 \text{ m}^3
 \end{aligned}$$

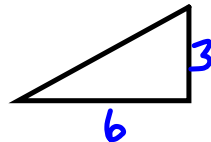
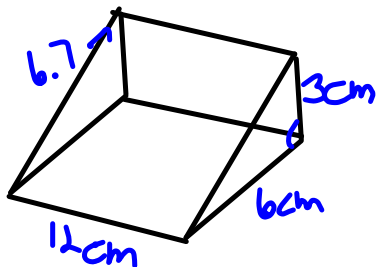
★ 6 a)



$$\begin{aligned}
 A_{\text{base}} &= \frac{b \times h}{2} \\
 &= \frac{15.5 \times 4.4}{2} \\
 &= \frac{68.2}{2} \\
 &= 34.1 \text{ cm}^2
 \end{aligned}$$

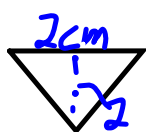
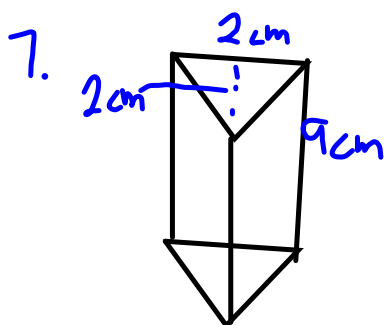
$$\begin{aligned}
 \text{Vol} &= A_{\text{base}} \times h \\
 &= 34.1 \times 15.6 \\
 &= 531.96 \text{ cm}^3
 \end{aligned}$$

★ b)



$$\begin{aligned}
 A_3 &= \frac{b \times h}{2} \\
 &= \frac{6 \times 3}{2} \\
 &= \frac{18}{2} \\
 &= 9 \text{ cm}^2
 \end{aligned}$$

$$\begin{aligned}
 \text{Vol} &= A_{\text{base}} \times h \\
 &= 9 \times 12 \\
 &= 108 \text{ cm}^3
 \end{aligned}$$



Homework
Solutions

$$A_b = \frac{b \times b}{2}$$

$$= \frac{2 \times 2}{2}$$

$$= \frac{4}{2}$$

$$= 2 \text{ cm}^2$$

$$\text{Vol} = A_b \times h$$

$$= 2 \times 9$$

$$= 18 \text{ cm}^3$$

8. $\text{Vol} = 30 \text{ cm}^3$ $A_{\text{base}} = 4 \text{ cm}^2$

$$h = \frac{30}{4}$$

$$= 7.5 \text{ cm}$$

9. . Vol = $A_b \times h$ Homework

Solutions

a) $S = _ \times _$

$A_b = 1 \text{ cm}^2$ $h = 5 \text{ cm}$
 $A_b = 2 \text{ cm}^2$ $h = 2.5 \text{ cm}$

b) $9 \text{ m}^3 = _ \times _$

$A_b = 1 \text{ m}^2$, $h = 9 \text{ m}$
 $A_b = 3 \text{ m}^2$, $h = 3 \text{ m}$
 $A_b = 9 \text{ m}^2$, $h = 1 \text{ m}$

c) $8 \text{ m}^3 = _ \times _$

$A_b = 1 \text{ m}^2$ $h = 8 \text{ m}$
 $A_b = 2 \text{ m}^2$ $h = 4 \text{ m}$
 $A_b = 4 \text{ m}^2$ $h = 2 \text{ m}$
 $A_b = 8 \text{ m}^2$ $h = 1 \text{ m}$

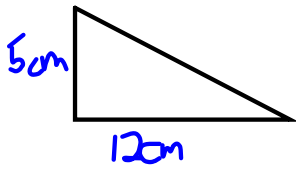
d) $18 \text{ cm}^3 = _ \times _$

$A_b = 2 \text{ m}^2$ $A = 9 \text{ m}$
 $A_b = 3 \text{ m}^2$ $A = 6 \text{ m}$

b) To find all possibilities, list the factors.

10. Sketch

Homework
Solutions



$$A_b = \frac{b \times h}{2}$$

$$= \frac{12 \times 5}{2}$$

$$= \frac{60}{2}$$

$$= 30 \text{ cm}^2$$

$$\text{Vol} = A_b \times h$$

$$= 30 \times 4$$

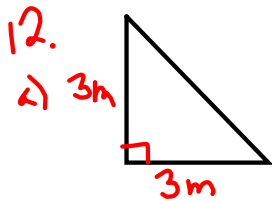
$$= 120 \text{ cm}^3$$

b) $\frac{120}{20} = 6$ people will be served cheese.

11. $\text{Vol} = A_{\text{base}} \times h$
 $50 = A_{\text{base}} \times 5$
 10×5

Homework
Solutions

so A_{base} (or triangular face) is 10 m^2



$$A_b = \frac{b \times h}{2}$$

$$= \frac{3 \times 3}{2}$$

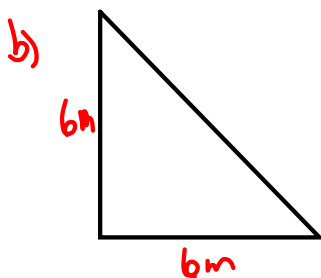
$$= \frac{9}{2}$$

$$= 4.5 \text{ m}^2$$

$$\text{Vol} = A_{\text{base}} \times h$$

$$= 4.5 \times 0.25$$

$$= 1.125 \text{ m}^3$$



$$A = \frac{b \times h}{2}$$

$$= \frac{6 \times 6}{2}$$

$$= \frac{36}{2}$$

$$= 18 \text{ m}^2$$

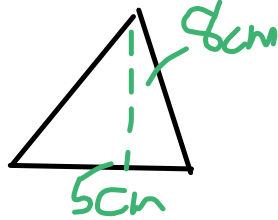
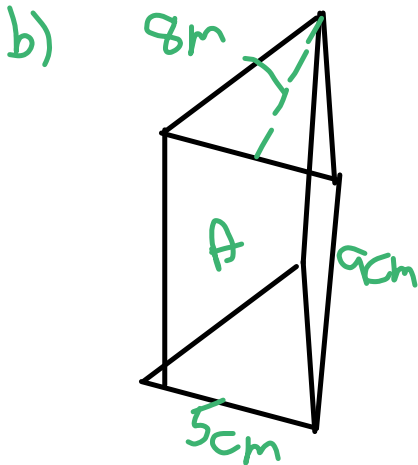
$$\text{Vol} = A_b \times h$$

$$= 18 \times 0.25$$

$$= 4.5 \text{ m}^3$$

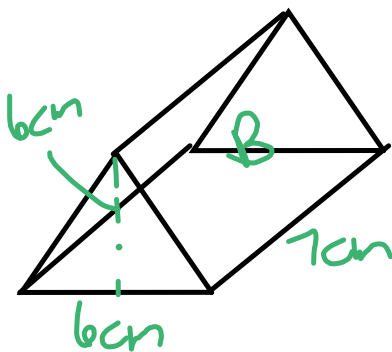
Jackie needs 4 times as much concrete

13. a) Prediction
Prism A



$$\begin{aligned}
 A_b &= \frac{b \times h}{2} \\
 &= \frac{8 \times 5}{2} \\
 &= \frac{40}{2} \\
 &= 20 \text{ cm}^2
 \end{aligned}$$

$$\begin{aligned}
 \text{Vol} &= A_b \times h \\
 &= 20 \times 9 \\
 &= 180 \text{ cm}^3
 \end{aligned}$$



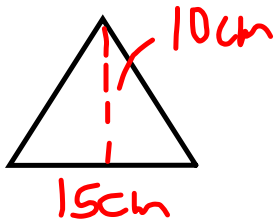
$$\begin{aligned}
 A_b &= \frac{b \times h}{2} \\
 &= \frac{6 \times 6}{2} \\
 &= \frac{36}{2} \\
 &= 18 \text{ cm}^2
 \end{aligned}$$

$$\begin{aligned}
 V &= A_b \times h \\
 &= 18 \times 7 \\
 &= 126 \text{ cm}^3
 \end{aligned}$$

Prediction was correct

c) If Prism B had a height of 10 cm it would have the same volume as A.

1.4 sketch



$$\begin{aligned}
 A_p &= \frac{b \times h}{2} \\
 &= \frac{15 \times 10}{2} \\
 &= \frac{150}{2} \\
 &= 75 \text{ cm}^2
 \end{aligned}$$

$$\begin{aligned}
 \text{Vol} &= A_p \times h \\
 &= 75 \times 30 \\
 &= 2250 \text{ cm}^3
 \end{aligned}$$

b) Contains 1350 ml of water
depth = ?

$$1350 \text{ ml} = \underline{1350} \text{ cm}^3$$

$$\begin{aligned}
 \text{Vol} &= A_{\text{base}} \times h \\
 1350 &= 75 \times h
 \end{aligned}$$

$$\frac{1350}{75} = 18$$

The depth would be
18cm

$$\text{c) } \frac{1350}{2250} = 0.6 \text{ or } 60\% \text{ water}$$

15. Volume = 198 cm^3
 A_{base} = 18

Vol = A_{base} × h
 $198 = 18 \times h$

$\frac{198}{18} = h$

$11 = h$



$18 = \frac{b \times h}{2}$

$36 = b \times h$

Base of Δ , Height of Δ , Height of Prism

- 1
- 2
- 3
- 4
- 6
- 9

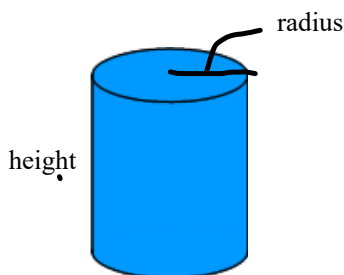
- 36
- 18
- 12
- 9
- 6
- 4

- 11
- 11
- 11
- 11
- 11
- 11

⋮

Surface Area of a Cylinder

When finding the surface area of a cylinder, you still have to find the area of the faces then add them. However, what are the shapes of the faces?



The top and bottom are both _____

If you unroll the curved face of the cylinder, you will get a



One side of the _____ is the _____ of the cylinder,
and
the other side of the _____ is the _____ of the circle

Step 1) Find the area of the circle

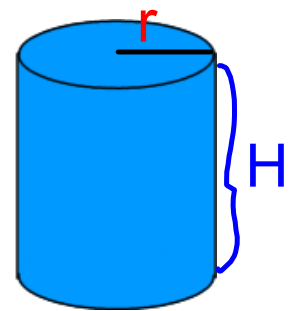
Step 2) Find the circumference of the circle

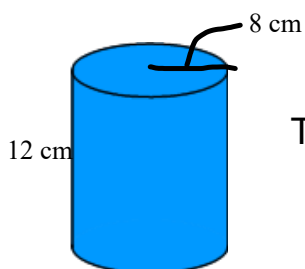
Step 3) Find the area of the rectangle $A = b \times h$

$= \text{circumference} \times h$

Step 4) Find the Total SA = 2Circles + Rectangle

$$\begin{aligned}\text{Total SA}_{\text{cyl}} &= 2\text{Circles} + \text{Rectangle} \\ &= 2 \pi r^2 + 2 \pi r H \\ &= [2 \times 3.14 \times r \times r] + [2 \times 3.14 \times r \times H]\end{aligned}$$





$$\begin{aligned} \text{Total SA}_{\text{cyl}} &= 2\text{Circles} + \text{Rectangle} \\ &= 2 \pi r^2 + 2 \pi r H \\ &= [2 \times 3.14 \times r \times r] + [2 \times 3.14 \times r \times H] \end{aligned}$$

Fill in the radius and the Height of the cylinder

=

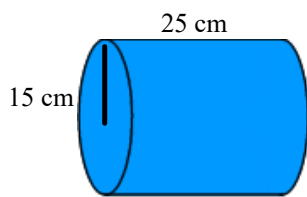
Use a calculator and

=

=

=

Find the surface area



$$\text{Total SA}_{\text{cyl}} =$$

=

Use a calculator

=

=

Your Turn

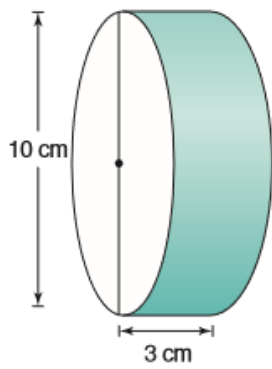
Class/Homework

page 212-213

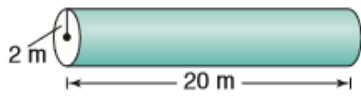
6(b, c) MAKE sure to use radius NOT diameter

#9

6 b)



c)



9. A cylindrical tank has diameter 3.8 m and length 12.7 m. What is the surface area of the tank?