

WARM UP GRADE 8


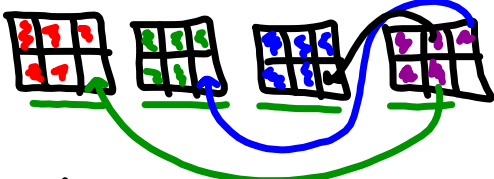
Jan. 17, 2020

Copy this on your own paper

Model with blocks and number lines. State the answer

a) $\frac{5}{6} \times 4$

4 groups of $\frac{5}{6}$



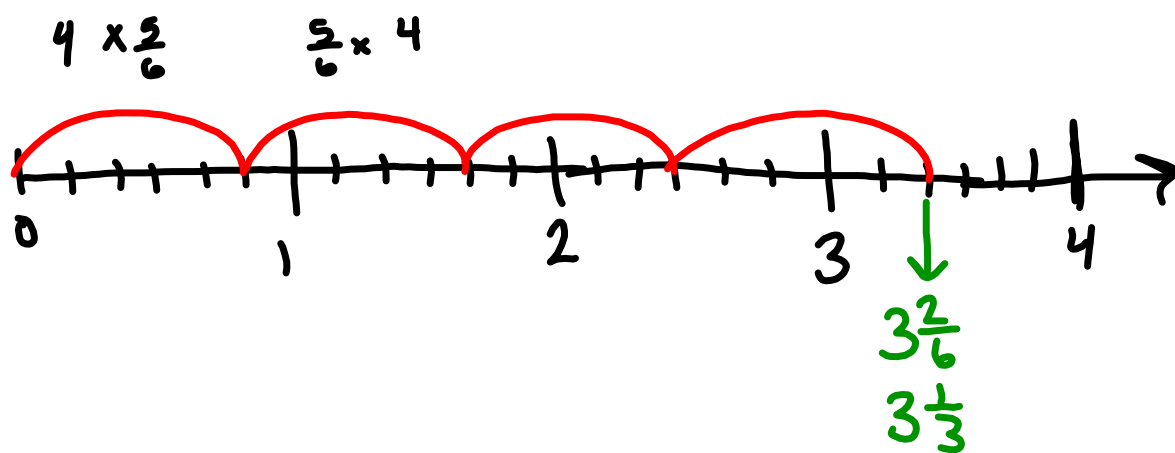
3 $\frac{2}{6}$
Reduce

= $3 \frac{1}{3}$

b) 5×4



$6 \frac{2}{3}$



pg 108

5. $\frac{5}{9}$ of 45

$$\frac{5}{9} \times 45 \text{ or } 45 \times \frac{5}{9}$$

$$\frac{1}{9} \rightarrow 5$$

$$\frac{5}{9} \rightarrow 25$$

9 $\frac{1}{12}$ of 36

$$\frac{1}{12} \times 36 \text{ or } 36 \times \frac{1}{12}$$

$$\frac{1}{12} \rightarrow 3$$

b) $\frac{3}{8}$ of 32

$$\frac{3}{8} \times 32 \text{ or } 32 \times \frac{3}{8}$$

$$\frac{1}{8} \rightarrow 4$$

$$\frac{3}{8} \rightarrow 12$$

d) $\frac{4}{5}$ of 25

$$\frac{4}{5} \times 25 \text{ or } 25 \times \frac{4}{5}$$

$$\frac{1}{5} \rightarrow 5$$

$$\frac{4}{5} \rightarrow 20$$

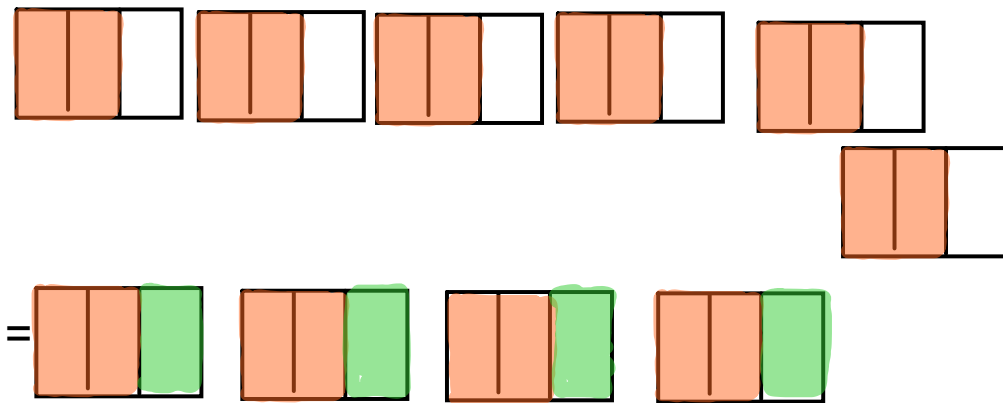
$$\star 6 \text{ of } \frac{1}{4} + \frac{1}{4} + \frac{1}{4} = 3 \times \frac{1}{4} = \frac{3}{4} \quad \frac{1}{4} \times 3$$

b) $7 \times \frac{2}{5} = \frac{14}{5}$ or $\frac{2}{5} \times 7$

c) $\frac{3}{10} + \frac{3}{10} + \frac{3}{10} + \frac{3}{10}$

$$4 \times \frac{3}{10} = \frac{12}{10} \text{ or } \frac{3}{10} \times 4$$

$$7. \frac{2}{3} \times 6$$



$$\frac{2}{3} \times 6 = \frac{12}{3} \text{ or } 4$$

$$8a) \frac{4}{5} \times 4 = \frac{16}{5} \text{ or } 3\frac{1}{5}$$

$$b) \frac{1}{2} \times 9 = \frac{9}{2} \text{ or } 4\frac{1}{2}$$

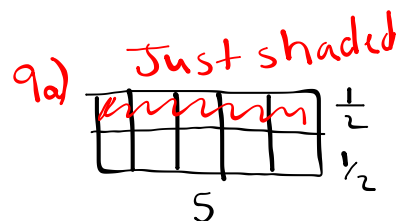
$$c) \frac{5}{6} \times 3 = \frac{15}{6} \text{ or } 2\frac{3}{6}$$

$$9a) \frac{1}{2} \times 5 = \frac{5}{2} \text{ or } 2\frac{1}{2}$$

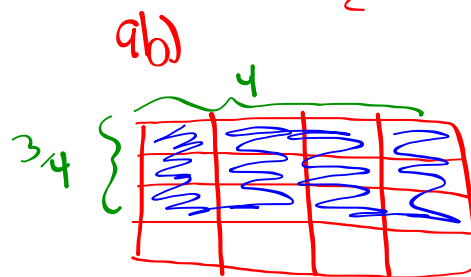
$$b) \frac{3}{4} \times 4 = \frac{12}{4} \text{ or } 3$$

$$10a) \frac{1}{2} \times 4 = 2$$

$$b) \frac{2}{3} \times 5 = \frac{10}{3}$$

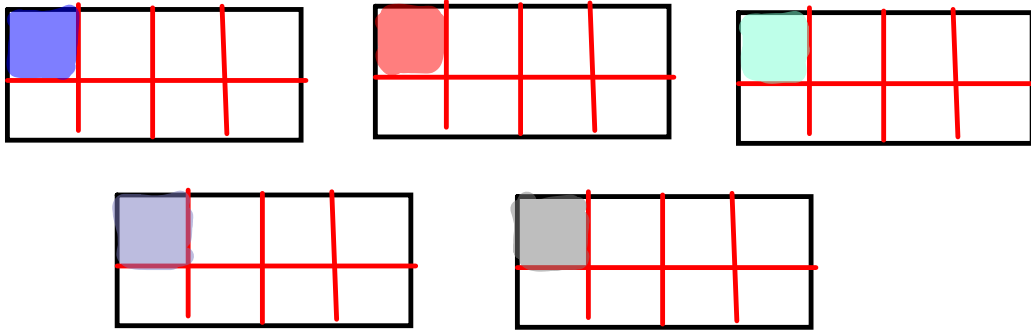


$$\begin{aligned} \text{Area} &= \frac{1}{2} \times 5 \\ &= \frac{5}{2} \end{aligned}$$

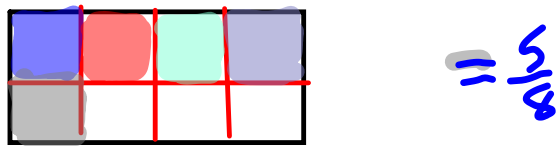


$$\begin{aligned} \text{Area} &= \frac{3}{4} \times 4 \\ &= \frac{12}{4} = 3 \end{aligned}$$

11
★ a) $5 \times \frac{1}{8}$

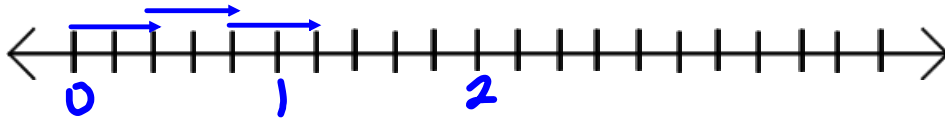


=



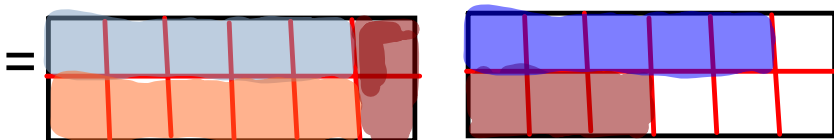
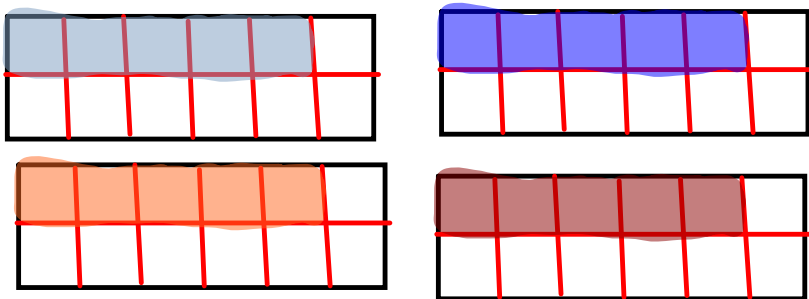
★ b) $\frac{2}{5} \times 3$

□



= $\frac{6}{5}$

★ c) $4 \times \frac{5}{12}$



= $\frac{20}{12}$ or $1\frac{8}{12}$

$$12. \frac{1}{2} \times 24$$

$$= 12$$



$$b) \frac{1}{3} \times 24$$

$$= 8$$



$$c) \frac{1}{4} \times 24$$

$$= 6$$




$$d) \frac{1}{6} \times 24$$

$$= 4$$



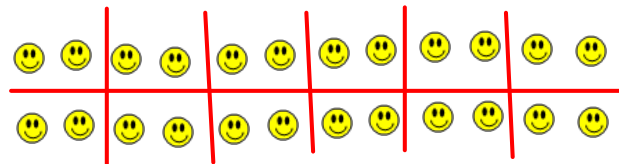
$$e) \frac{1}{8} \text{ of } 24$$

$$= 3$$



$$f) \frac{1}{12} \text{ of } 24$$

$$= 2$$



$$Ba) \frac{2}{2} \text{ of } 24 = 24$$

$$b) \frac{2}{3} \text{ of } 24 = 16$$

$$c) \frac{3}{4} \text{ of } 24 = 18$$

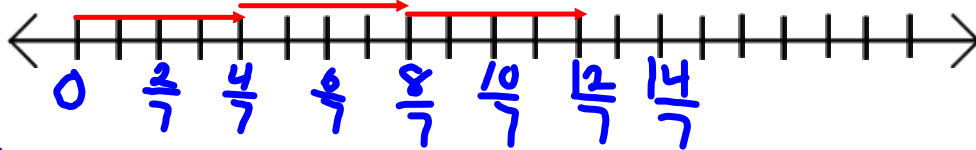
$$d) \frac{5}{6} \text{ of } 24 = 20$$

$$e) \frac{3}{8} \text{ of } 24 = 9$$


$$f) \frac{5}{12} \text{ of } 24 = 10$$

pg 109

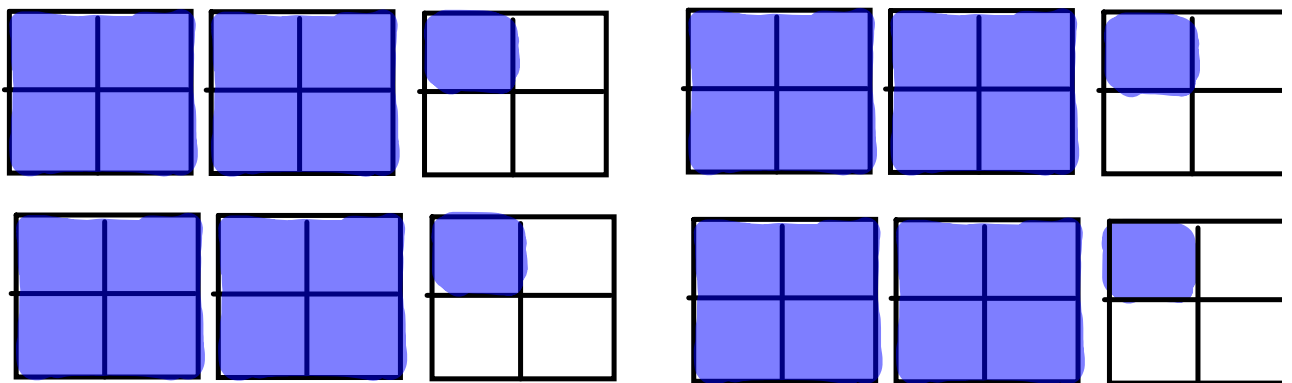
★ $14 \text{ a } 3 \times \frac{4}{7} = \frac{12}{7}$



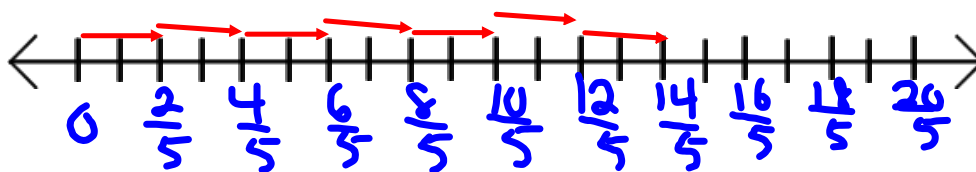
b) $\frac{2}{15} \times 10 = \frac{20}{15}$



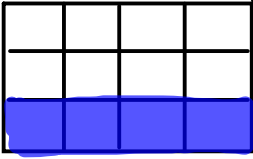
★ $14 \text{ c) } 4 \times \frac{9}{4} = 9$



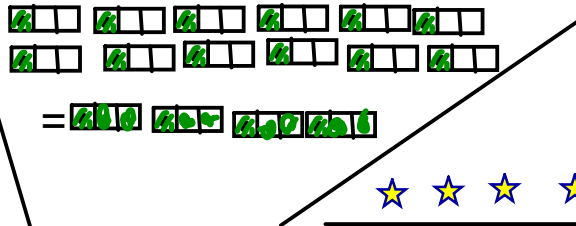
d) $\frac{2}{5} \times 7 = \frac{14}{5}$





15. ★ or



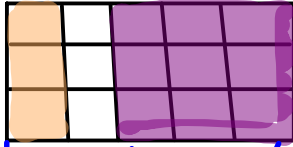
$\frac{1}{3}$ of 12 = 4




= 




b) $\frac{1}{5} \times 15$ or

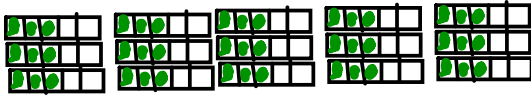



b $\frac{1}{5}$ $\frac{3}{5}$



= 3 = 


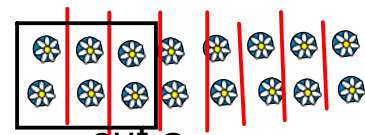
★ c) $\frac{3}{5}$ of 15 = 9




= 

or

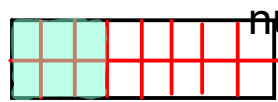
d) $\frac{3}{8} \times 16$
 $\frac{1}{8}$ of 16 = 2
 $\frac{3}{8}$ of 16 = 2 x 3 = 6

cut a block into 16 then find $\frac{1}{8}$ of it shade that in then do that by the

= 

or



numerator

$$16 \text{ a) } \star 3 \times \frac{4}{5} = \frac{12}{5}$$

$$b) 5 \times \frac{7}{9} = 3\frac{5}{9}$$

$$\star c) \frac{5}{3} \times 6 = \frac{30}{3} = 10$$

$$d) \frac{1}{2} \times 5 = \frac{5}{2}$$

$$e) 12 \times \frac{7}{8} = \frac{84}{8}$$

$$\star f) \frac{2}{4} \times 9 = \frac{18}{4}$$

$$\star 17) \frac{2}{3} \times 24$$

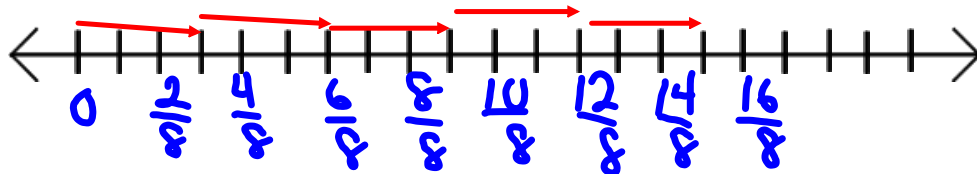
1/3 of 24 is 8

so

2/3 of 24 is $2 \times 8 = 16$

$$18. 5 \times \frac{3}{8}$$

I want to give $\frac{3}{8}$ of a choc. bar to 5 friends. How many bars do I need?



$\frac{15}{8}$ or $1\frac{7}{8}$ bars.

$$20. \frac{4}{7} \text{ of } 28$$

$$\frac{1}{7} \text{ of } 28 = 4$$

$$\frac{4}{7} \text{ of } 28 = 4 \times 4 = 16$$



Multiplying Fractions - using modeling

We have multiplied a fraction by a whole number, and a whole number by a fraction. $6 \times \frac{2}{3}$ and $\frac{2}{3} \times 6$

Now we are going to multiply a fraction by a fraction, using modeling.

You have to look for a pattern that exists in each of these methods to determine how to multiply fractions without modeling.

$1/3$ of $1/2$

$3/5$ of $1/3$

Step 1) Draw a rectangle that is divided into _____ vertically (Denominator of first fraction).

Step 2) Shade in _____ (numerator) of first fraction.

Step 3) Divide Same Rectangle HORIZONTALLY by _____ (Denominator of second fraction)

Step 4) Shade in _____ (numerator) of second fraction.

Answer is the OVERLAP

$2/3$ of $1/4$

$1/2$ of $1/5$

$3/4$ of $4/7$

$1/3$ of $5/8$

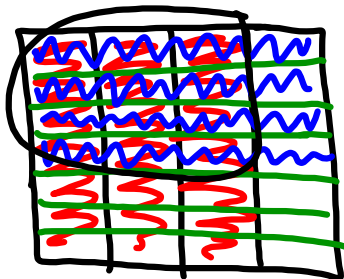
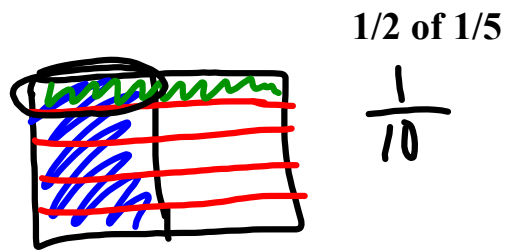
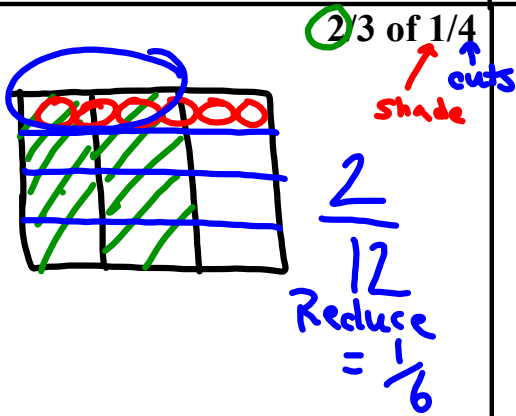
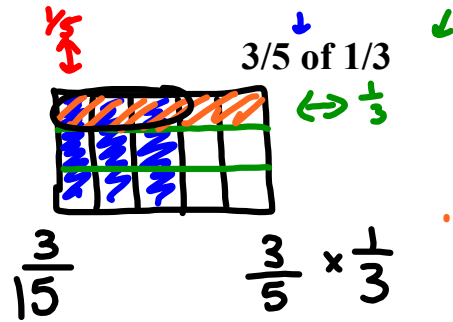
$2/5$ of $5/6$

$3/10$ of $5/6$

where the colors overlap is the answer to multiplication

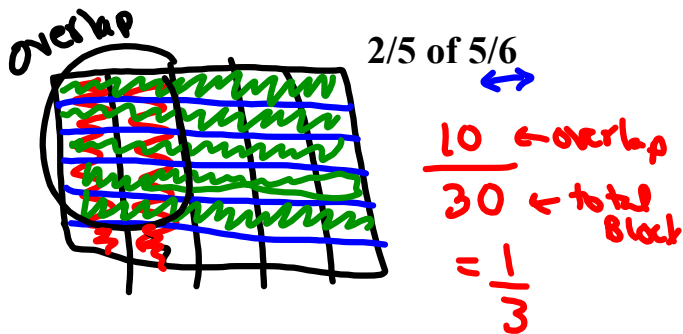
1/3 of 1/2

- 1) Draw a rectangle that is divided into _____ vertically (Denominator of first fraction).
- 2) Shade in _____ (numerator) of first fraction.
- 3) Divide Same Rectangle HORIZONTALLY by _____ (Denominator of second fraction)
- 4) Shade in _____ (numerator) of second fraction.



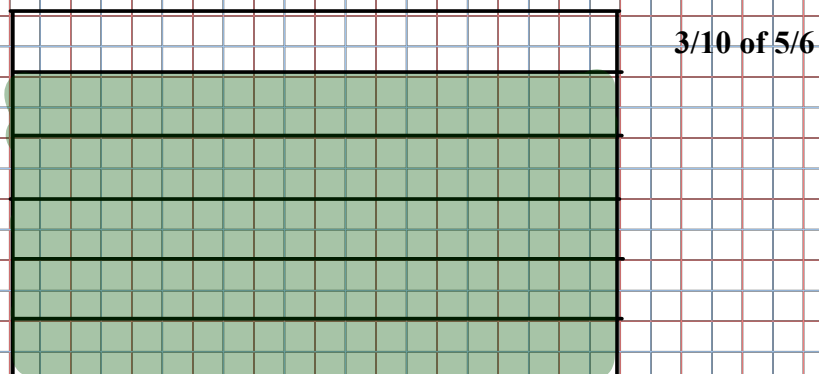
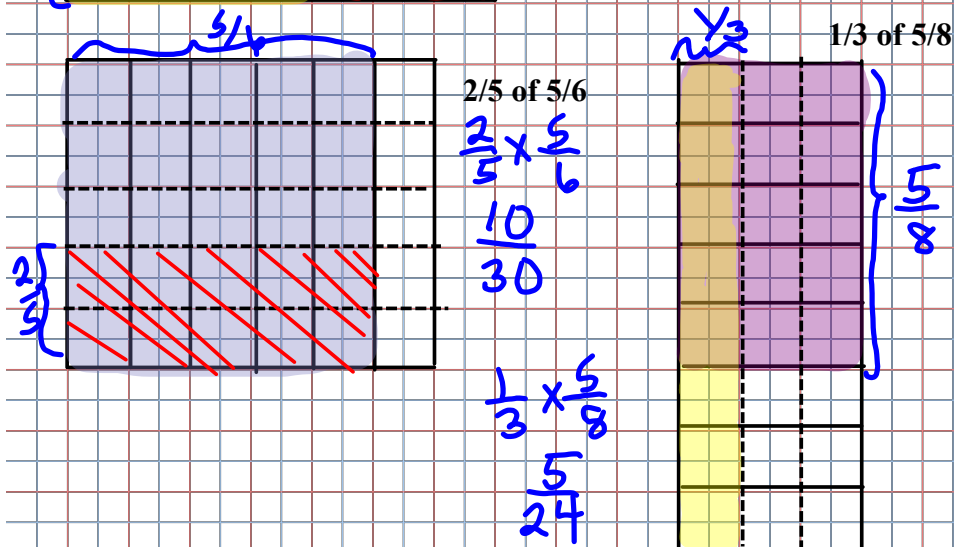
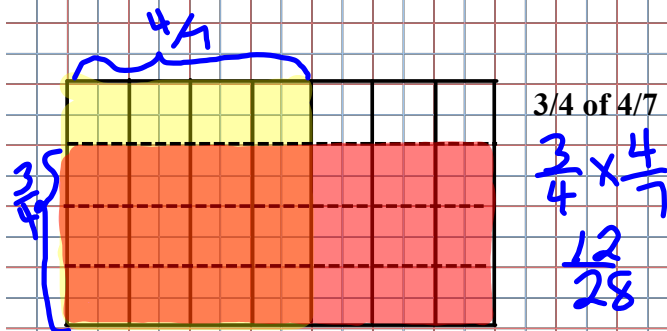
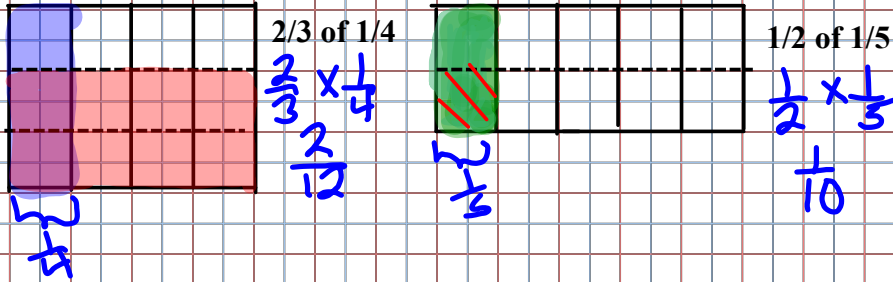
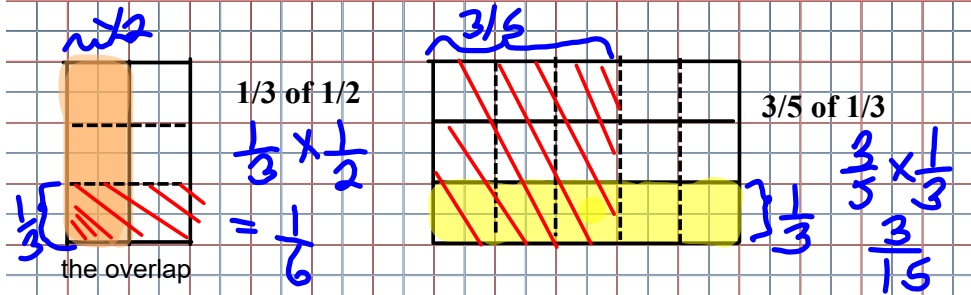
3/4 of 4/7

$$\frac{12}{28} \begin{matrix} \div 4 \\ \div 4 \end{matrix} = \frac{3}{7} \text{ Reduced}$$



1/3 of 5/8

3/10 of 5/6



Homework

page 113 #5 (do it all together)^{model}, 6, 7d, 8(a,c,e)

$$\frac{3}{5} \times \frac{1}{4}$$

top x top
Bottom x Bot

Redu