

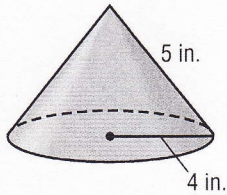
**7-8**

**Practice: Skills**

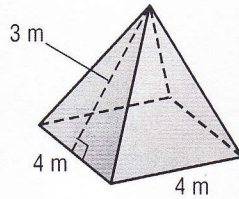
**Surface Area of Pyramids and Cones**

Find the surface area of each solid. Round to the nearest tenth if necessary.

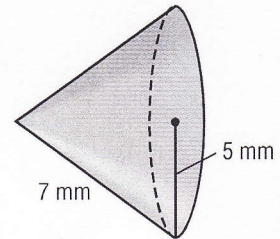
1.



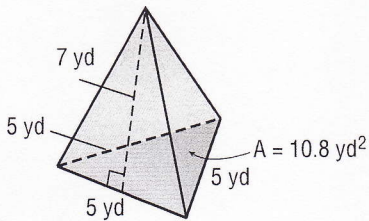
2.



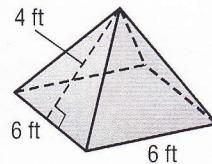
3.



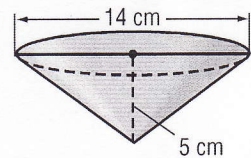
4.



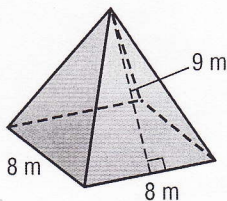
5.



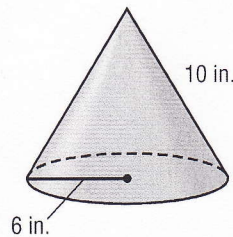
6.



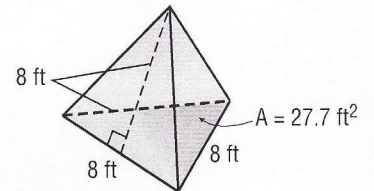
7.



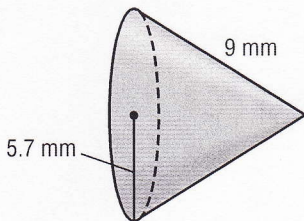
8.



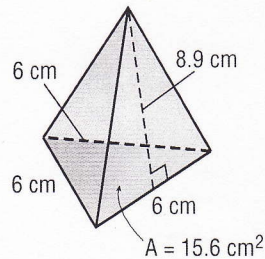
9.



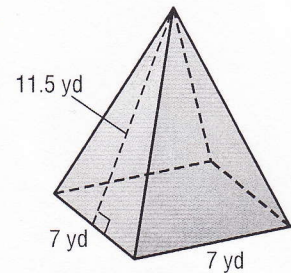
10.



11.



12.



13. square pyramid: base side length, 4 cm; slant height, 7.3 cm

14. square pyramid: base side length, 5 yd; slant height, 12.7 yd

15. cone: diameter, 26 in.; slant height, 8 in.