

INSTRUCTIONS: Put your answer in the blank that is provided. Make sure all fractions are completely reduced.

### Reading a Standard Ruler

How many Inches ?



\_\_\_\_\_



\_\_\_\_\_



\_\_\_\_\_



\_\_\_\_\_



\_\_\_\_\_



\_\_\_\_\_



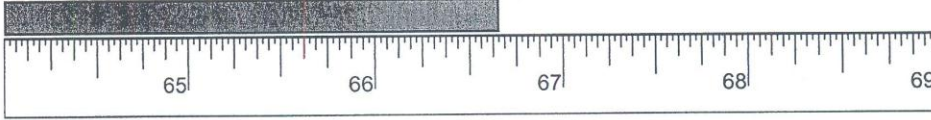
\_\_\_\_\_



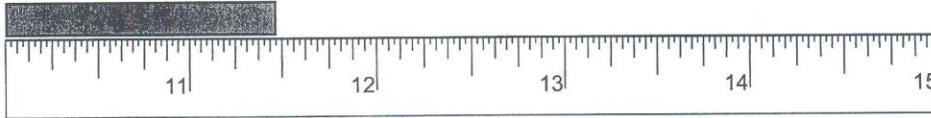
\_\_\_\_\_

# Reading a Tape Measure

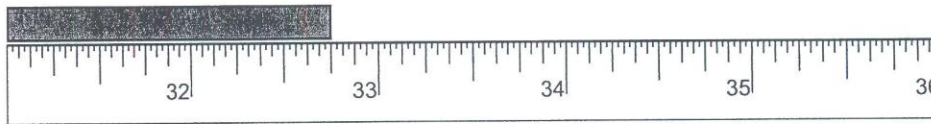
How many feet and inches?




\_\_\_\_\_




\_\_\_\_\_



\_\_\_\_\_




\_\_\_\_\_




\_\_\_\_\_



\_\_\_\_\_



\_\_\_\_\_



\_\_\_\_\_

