

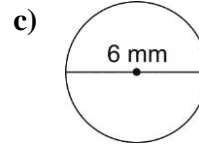
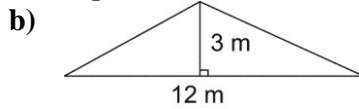
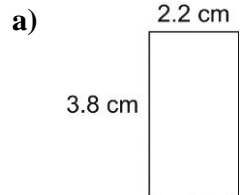
Grade 8 Unit 4

Activating Prior Knowledge

Area of Two-Dimensional Shapes

Quick Review

1) Find the area of each shape.



2) Find the area of the each shape and sketch the shape.

- a. A triangle with height 3 m and base 4 m
- b. A triangle with height 2 mm and base 5 mm
- c. A rectangle with length 7 cm and width 1.5 cm
- d. A square with side length 11 cm
- e. A circle with diameter 8 cm

3) Find the surface Area

