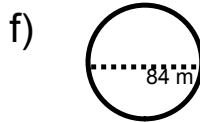
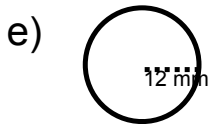
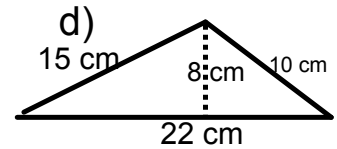
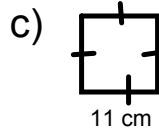
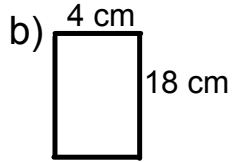
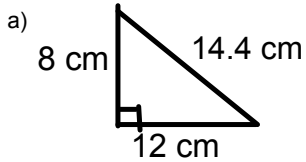


Class/Homework

Worksheet of REVIEW

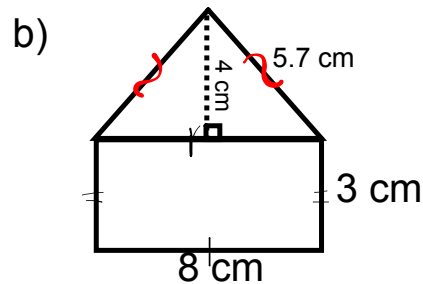
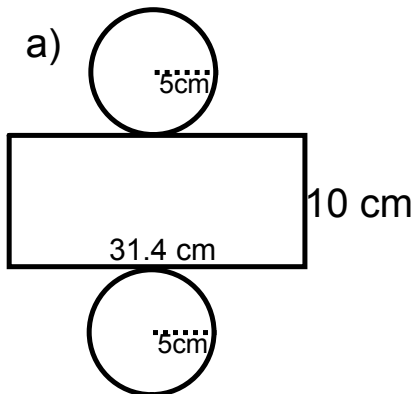
1) Find the area of each



2) Find the area of the each shape and sketch the shape.

- a. A triangle with height 15 m and base 6 m
- b. A triangle with height 7 mm and base 6 mm
- c. A rectangle with length 10 cm and width 2.5 cm
- d. A square with side length 9 cm
- e. A circle with diameter 12 cm

3) Find the total area



Attachments

Review of Surface area of 2D Shape Grade 8 Unit 4 PDF.pdf