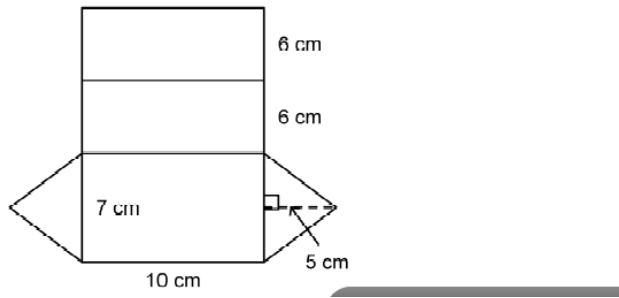
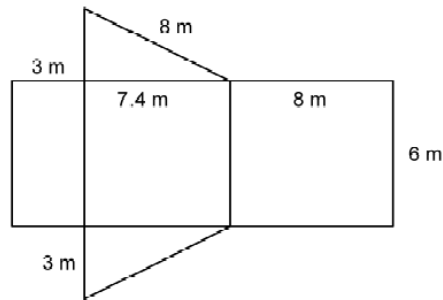


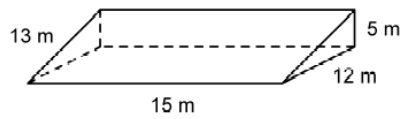
1. Calculate the area of this net of a right triangular prism.



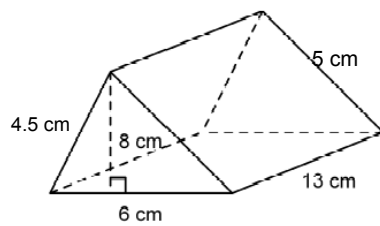
Calculate the area of this net of a right triangular prism.



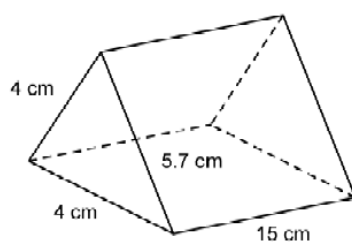
Use the net to find the surface area of



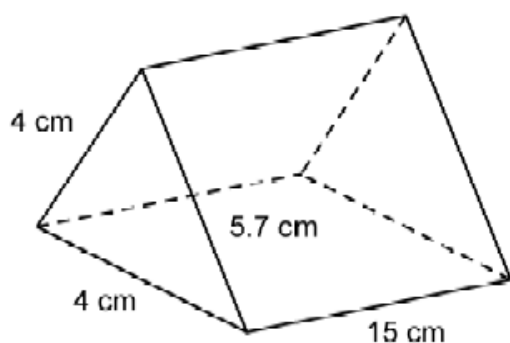
Calculate the area of



5. The area of each triangular face of this right triangular prism is
Calculate the total surface area of the prism.



The area of each triangular face of this right triangular prism
 Calculate the total surface area of the prism.



Calculate the surface area of this right triangular prism.

